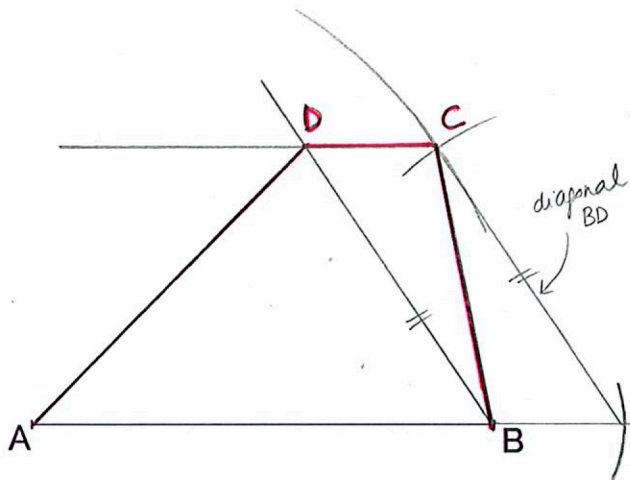
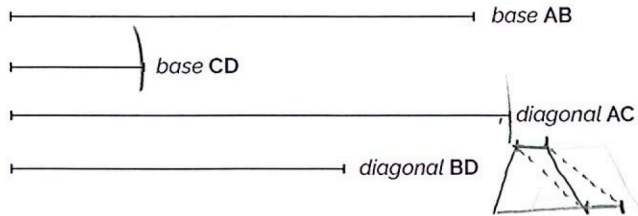



3. CUADRILÁTEROS

Halla el **trapezio** dadas las dos bases y las dos diagonales.



Halla el **trapezio circunscriptible** dada la Base AB , y los lados no paralelos AD y BC .



$$BC + AD = AB + CD$$

