



Nombre \_\_\_\_\_ Fecha \_\_\_\_\_

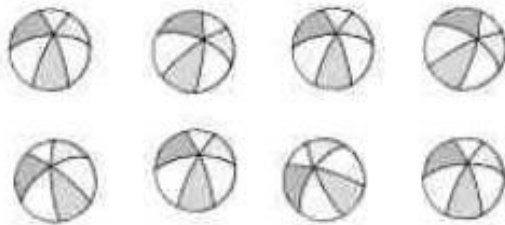
**1. Cuenta y rodea el número.**



3 5 7




2 4 6




6 7 8



1 4 8



3 6 9



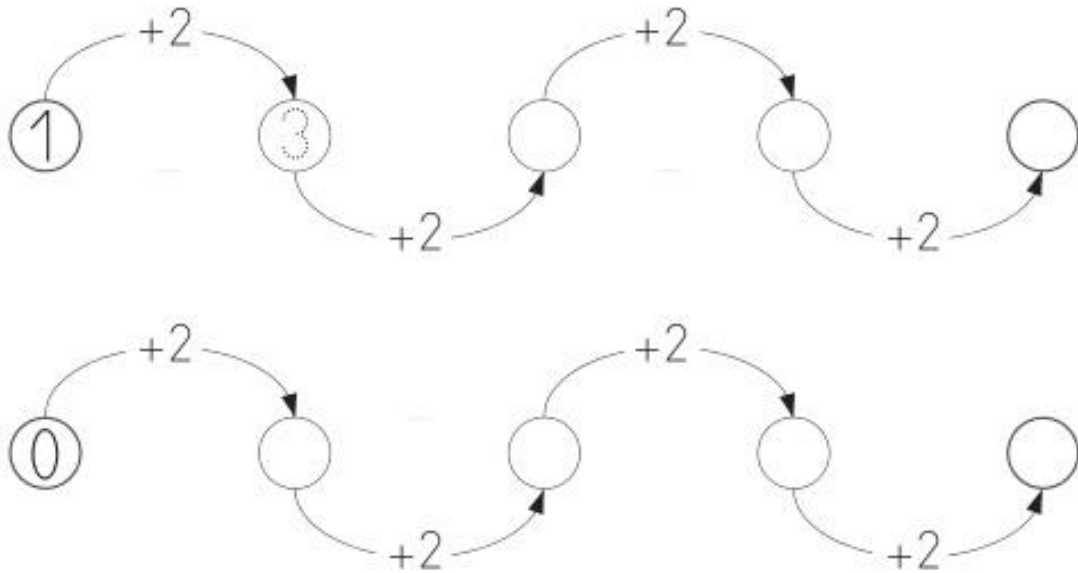
5 6 7

**2. Completa.**

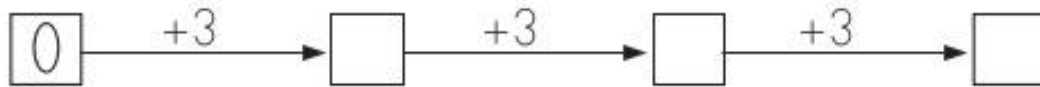



Nombre \_\_\_\_\_ Fecha \_\_\_\_\_

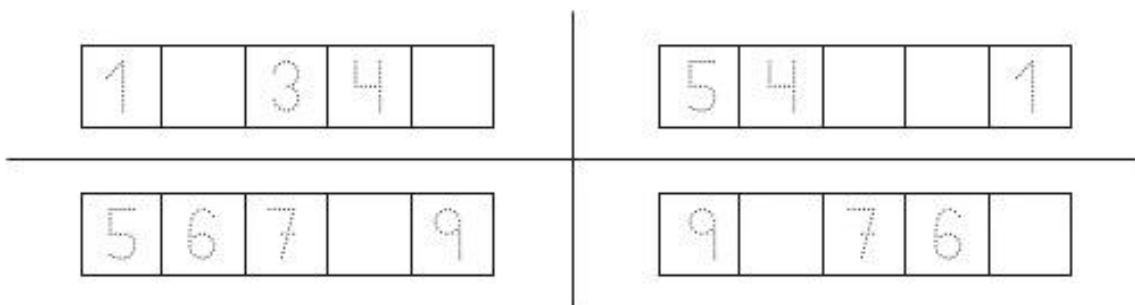
## 1. Completa.



## 2. Completa.



## 3. Escribe los números que faltan.




Nombre \_\_\_\_\_ Fecha \_\_\_\_\_

1. Escribe los números y suma.



$$\boxed{2} + \boxed{\phantom{0}} = \boxed{3}$$



$$\boxed{\phantom{0}} + \boxed{\phantom{0}} = \boxed{\phantom{0}}$$




$$\boxed{\phantom{0}} + \boxed{\phantom{0}} = \boxed{\phantom{0}}$$



$$\boxed{\phantom{0}} + \boxed{\phantom{0}} = \boxed{\phantom{0}}$$

2. Dibuja y suma.

$$3 + 2 = \boxed{\phantom{0}}$$



$$3 + 3 = \boxed{\phantom{0}}$$



$$4 + 2 = \boxed{\phantom{0}}$$






$$6 + 2 = \boxed{\phantom{0}}$$



## Descomposición de números hasta el 9

Nombre \_\_\_\_\_ Fecha \_\_\_\_\_

## 1. Observa y completa.



Nombre \_\_\_\_\_ Fecha \_\_\_\_\_


1. Completa.




$$\boxed{5} - \boxed{3} = \boxed{2}$$




$$\boxed{\phantom{0}} - \boxed{\phantom{0}} = \boxed{\phantom{0}}$$



$$\boxed{\phantom{0}} - \boxed{\phantom{0}} = \boxed{\phantom{0}}$$



$$\boxed{\phantom{0}} - \boxed{\phantom{0}} = \boxed{\phantom{0}}$$




$$\boxed{\phantom{0}} - \boxed{\phantom{0}} = \boxed{\phantom{0}}$$



$$\boxed{\phantom{0}} - \boxed{\phantom{0}} = \boxed{\phantom{0}}$$



$$\boxed{\phantom{0}} - \boxed{\phantom{0}} = \boxed{\phantom{0}}$$



$$\boxed{\phantom{0}} - \boxed{\phantom{0}} = \boxed{\phantom{0}}$$

Ordena las sílabas formando palabras.

ta na ta

te

na an

ni ne no

ne

ca lu

no co na

co

ta me

te co le

sa

du me

de ra ma

de

ca na

ra su ba

no

ra ve

ji ra fa

di

jo bu