



FICHA 5

Nombre y apellidos:

◆ Completa las series.



◆ Suma.

$$\boxed{2} + \boxed{1} = \boxed{}$$

$$\boxed{3} + \boxed{2} = \boxed{}$$

$$\boxed{0} + \boxed{4} = \boxed{}$$

$$\boxed{4} + \boxed{3} = \boxed{}$$

$$\boxed{3} + \boxed{1} = \boxed{}$$

$$\boxed{2} + \boxed{5} = \boxed{}$$

$$\boxed{3} + \boxed{3} = \boxed{}$$

$$\boxed{4} + \boxed{5} = \boxed{}$$

$$\boxed{7} + \boxed{1} = \boxed{}$$

$$\boxed{5} + \boxed{3} = \boxed{}$$

$$\boxed{8} + \boxed{0} = \boxed{}$$

$$\boxed{3} + \boxed{6} = \boxed{}$$

FICHA 11

Nombre y apellidos:

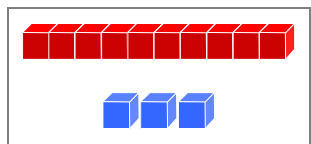
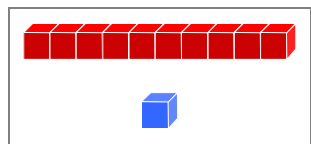
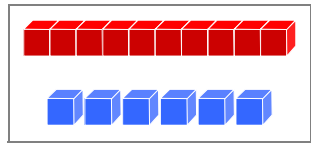
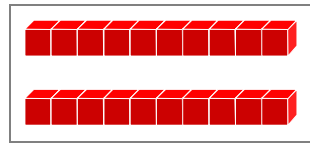
◆ Coloca y calcula.

$3 + 5$	$4 + 5$	$2 + 6$	$1 + 4$
<input type="text"/>	<input type="text"/>	<input type="text"/>	<input type="text"/>
<input type="text"/>	<input type="text"/>	<input type="text"/>	<input type="text"/>
<input type="text"/>	<input type="text"/>	<input type="text"/>	<input type="text"/>

◆ Coloca y calcula.

$8 - 2$	$6 - 3$	$7 - 1$	$15 - 3$
<input type="text"/>	<input type="text"/>	<input type="text"/>	<input type="text"/>
<input type="text"/>	<input type="text"/>	<input type="text"/>	<input type="text"/>
<input type="text"/>	<input type="text"/>	<input type="text"/>	<input type="text"/>

◆ Completa.

	+		=	<input type="text"/>
<input type="text"/>		<input type="text"/>		<input type="text"/>
<input type="text"/>	+		=	
<input type="text"/>		<input type="text"/>		<input type="text"/>