



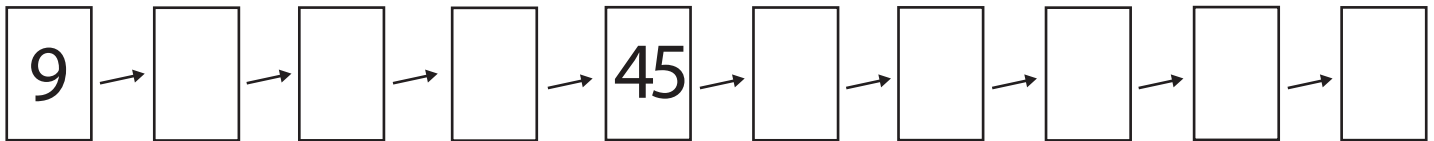
Tabla del




Completa la rueda.



Completa la secuencia de los multiplos del 9.



Colorea los multiplos del 9.



Resuelve las operaciones.

- $9 \times 6 = \underline{\hspace{2cm}}$
- $9 \times 2 = \underline{\hspace{2cm}}$
- $9 \times 3 = \underline{\hspace{2cm}}$
- $9 \times 9 = \underline{\hspace{2cm}}$
- $9 \times 1 = \underline{\hspace{2cm}}$
- $9 \times 5 = \underline{\hspace{2cm}}$
- $9 \times 8 = \underline{\hspace{2cm}}$
- $9 \times 4 = \underline{\hspace{2cm}}$
- $9 \times 7 = \underline{\hspace{2cm}}$
- $9 \times 10 = \underline{\hspace{2cm}}$