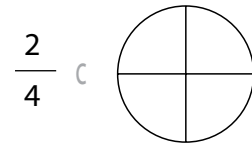
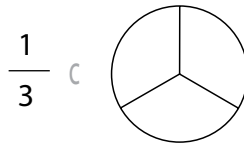
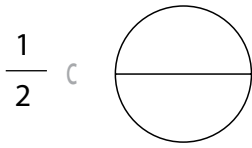
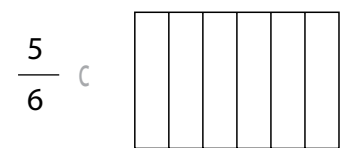
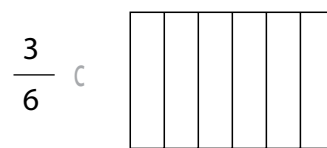
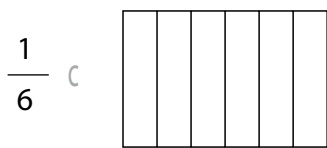


Nombre _____ Fecha _____

- Colorea y representa cada fracción.



- Colorea y representa cada fracción.



- Escribe > o < según corresponda.

$\frac{3}{4} \square \frac{5}{4}$

$\frac{5}{3} \square \frac{1}{3}$

$\frac{2}{8} \square \frac{6}{8}$

$\frac{10}{9} \square \frac{6}{9}$

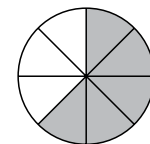
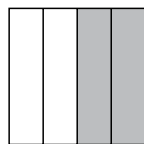
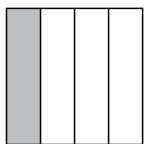
$\frac{3}{2} \square \frac{1}{2}$

$\frac{4}{6} \square \frac{8}{6}$

$\frac{2}{7} \square \frac{1}{7}$

$\frac{5}{5} \square \frac{3}{5}$

- Escribe la fracción que representa la parte coloreada.



- Escribe > o < según corresponda.

$\frac{1}{4} \square \frac{1}{3}$

$\frac{3}{7} \square \frac{3}{9}$

$\frac{4}{6} \square \frac{4}{8}$

$\frac{6}{8} \square \frac{6}{7}$

$\frac{2}{5} \square \frac{2}{3}$

$\frac{5}{8} \square \frac{5}{3}$

$\frac{2}{7} \square \frac{2}{9}$

$\frac{7}{9} \square \frac{7}{6}$

Nombre _____ Fecha _____

• Calcula.

$$\frac{3}{4} \text{ de } 80 \text{ 5 } \underline{\hspace{2cm}}$$

$$\frac{7}{10} \text{ de } 40 \text{ 5 } \underline{\hspace{2cm}}$$

$$\frac{1}{2} \text{ de } 60 \text{ 5 } \underline{\hspace{2cm}}$$

$$\frac{5}{6} \text{ de } 300 \text{ 5 } \underline{\hspace{2cm}}$$

$$\frac{2}{4} \text{ de } 400 \text{ 5 } \underline{\hspace{2cm}}$$

$$\frac{2}{5} \text{ de } 200 \text{ 5 } \underline{\hspace{2cm}}$$

• Calcula.

$$\frac{3}{5} \text{ de } 2.325 \text{ 5 } \underline{\hspace{2cm}}$$

$$\frac{4}{6} \text{ de } 3.618 \text{ 5 } \underline{\hspace{2cm}}$$

$$\frac{2}{4} \text{ de } 1.888 \text{ 5 } \underline{\hspace{2cm}}$$

$$\frac{5}{7} \text{ de } 3.941 \text{ 5 } \underline{\hspace{2cm}}$$


• Calcula y colorea las bolas según la clave.

De rojo $\frac{1}{5}$

De verde $\frac{1}{4}$

De azul $\frac{1}{10}$

De amarillo El resto



Nombre _____ Fecha _____

- Divide.

$85 \overline{) 25}$

$78 \overline{) 15}$

$94 \overline{) 14}$

$56 \overline{) 12}$

$93 \overline{) 37}$


$45 \overline{) 21}$

$38 \overline{) 18}$


$74 \overline{) 26}$

- Coloca y divide.


$768 : 25$




$963 : 38$




$5.429 : 37$



$4.527 : 18$



$42.120 : 45$



$34.298 : 36$

