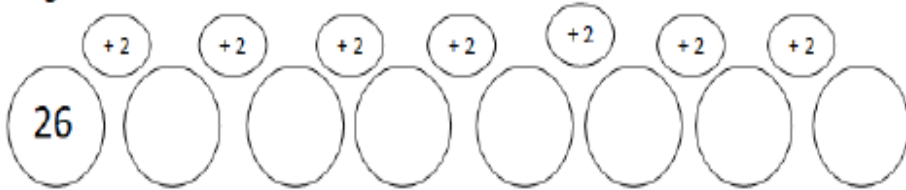
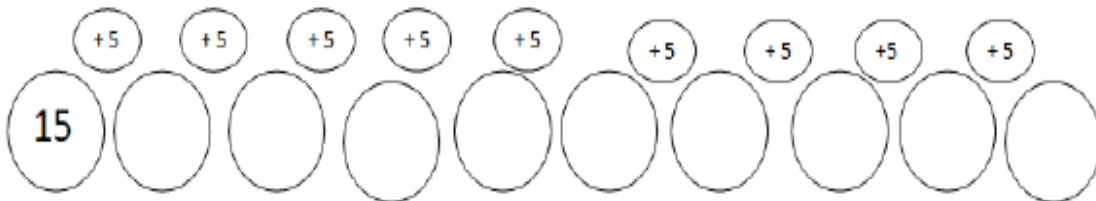
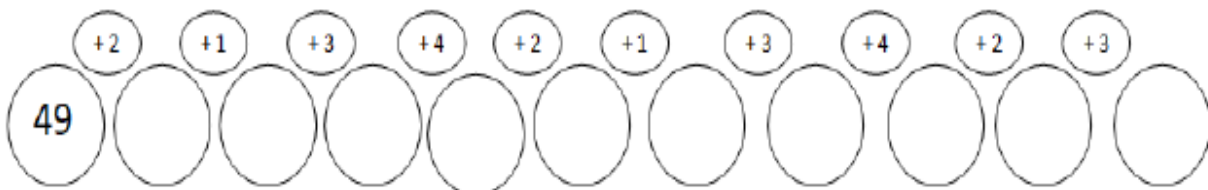
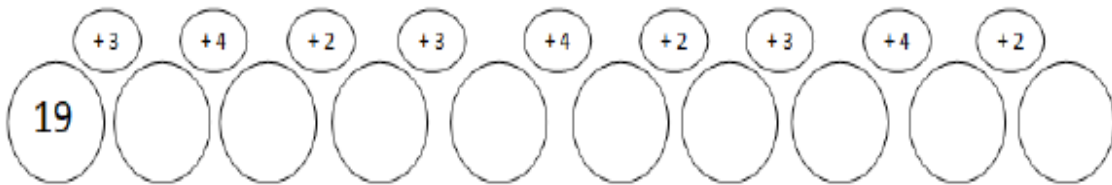
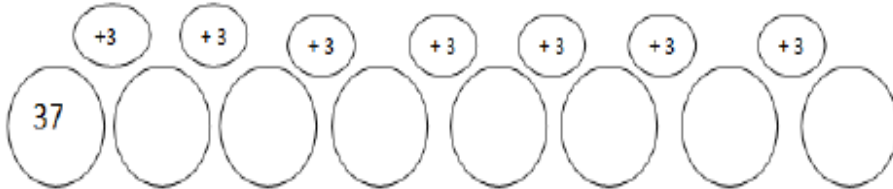


Sigue las series:



I



Calcula:

$$\begin{array}{r} 77 \\ + 11 \\ \hline \end{array}$$

$$\begin{array}{r} 88 \\ + 52 \\ \hline \end{array}$$

$$\begin{array}{r} 65 \\ + 53 \\ \hline \end{array}$$

$$\begin{array}{r} 51 \\ + 19 \\ \hline \end{array}$$

$$\begin{array}{r} 14 \\ + 96 \\ \hline \end{array}$$

$$\begin{array}{r} 51 \\ + 13 \\ \hline \end{array}$$

$$\begin{array}{r} 13 \\ + 44 \\ \hline \end{array}$$

$$\begin{array}{r} 65 \\ + 23 \\ \hline \end{array}$$

$$\begin{array}{r} 12 \\ + 32 \\ \hline \end{array}$$

$$\begin{array}{r} 79 \\ + 18 \\ \hline \end{array}$$

$$\begin{array}{r} 47 \\ + 20 \\ \hline \end{array}$$

$$\begin{array}{r} 25 \\ + 12 \\ \hline \end{array}$$

$$\begin{array}{r} 17 \\ + 30 \\ \hline \end{array}$$

$$\begin{array}{r} 65 \\ + 19 \\ \hline \end{array}$$

$$\begin{array}{r} 13 \\ + 70 \\ \hline \end{array}$$

$$\begin{array}{r} 92 \\ - 60 \\ \hline \end{array}$$

$$\begin{array}{r} 66 \\ - 54 \\ \hline \end{array}$$

$$\begin{array}{r} 39 \\ - 15 \\ \hline \end{array}$$

$$\begin{array}{r} 59 \\ - 45 \\ \hline \end{array}$$

$$\begin{array}{r} 62 \\ - 11 \\ \hline \end{array}$$

$$\begin{array}{r} 75 \\ - 62 \\ \hline \end{array}$$

$$\begin{array}{r} 99 \\ - 54 \\ \hline \end{array}$$

$$\begin{array}{r} 55 \\ - 22 \\ \hline \end{array}$$

$$\begin{array}{r} 79 \\ - 34 \\ \hline \end{array}$$

$$\begin{array}{r} 96 \\ - 70 \\ \hline \end{array}$$

$$\begin{array}{r} 74 \\ - 20 \\ \hline \end{array}$$

$$\begin{array}{r} 65 \\ - 33 \\ \hline \end{array}$$

$$\begin{array}{r} 77 \\ - 64 \\ \hline \end{array}$$

$$\begin{array}{r} 76 \\ - 24 \\ \hline \end{array}$$

$$\begin{array}{r} 98 \\ - 44 \\ \hline \end{array}$$