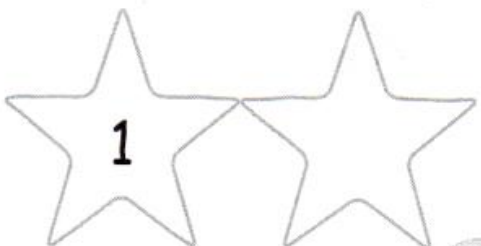

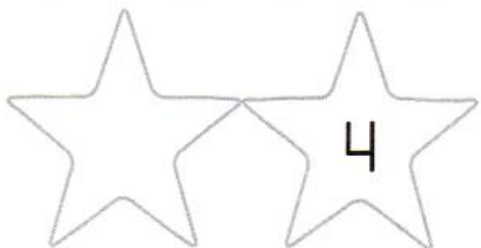


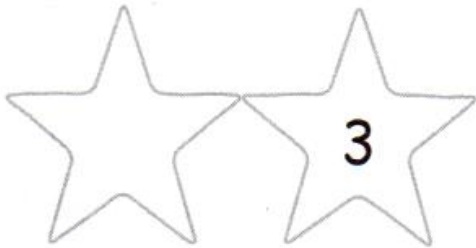
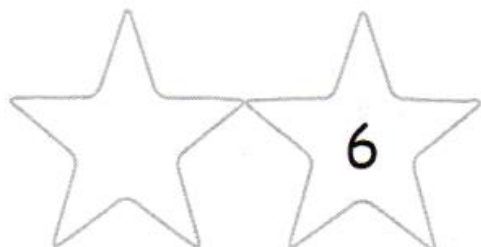
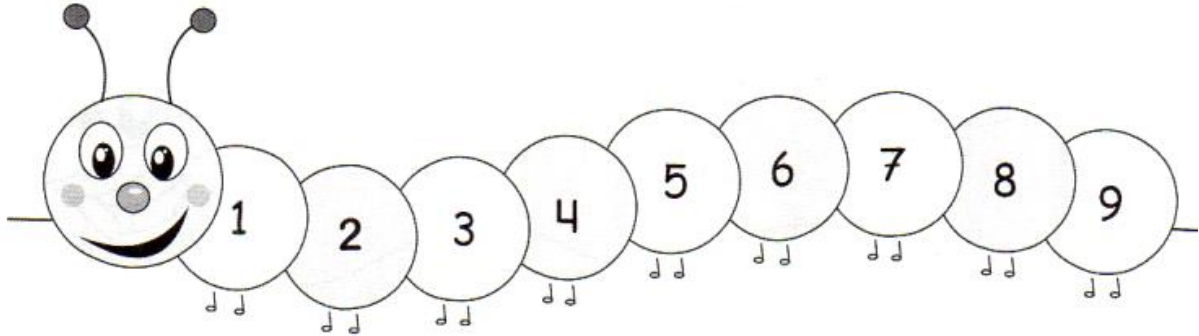


Anterior - posterior

Capacidad: Identifica posiciones, número anterior y posterior.

1. Escribe el número anterior y posterior según corresponda:



• Escribe los números que faltan.

3		5	
---	--	---	--

	7		9
--	---	--	---

2		4	
---	--	---	--

0		2	
---	--	---	--

5			8
---	--	--	---

6			9
---	--	--	---


Nombre

Fecha

Formas y colores

Capacidad: Clasifica las figuras de acuerdo a su color.

1. Colorea las figuras según la clave, ○ amarillo, □ verde, △ rojo, □ azul:





¿Cuántos botones hay?

Empty box — 2



4 buttons (2x2 grid) — Empty box




8 buttons (2x4 grid) — Empty box

Empty box — 3

Empty box — Empty box

Empty box — Empty box



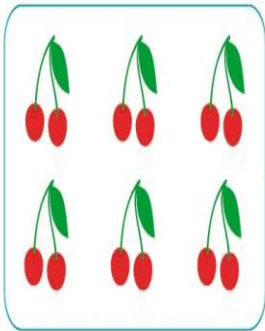
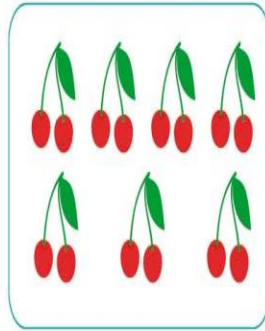
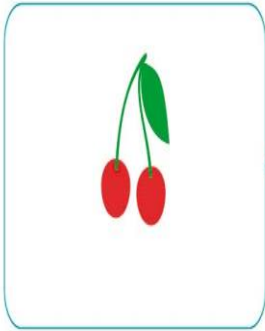
Nombre:



Colorea según la clave. 1. Fucsia 2. Amarillo 3. Rosa 4. Marrón claro 5. Marrón oscuro 6. verde 7. Celeste 8. Naranja












¿Cuántas cerezas hay?












Adición

Capacidad: Realiza operaciones sencillas.

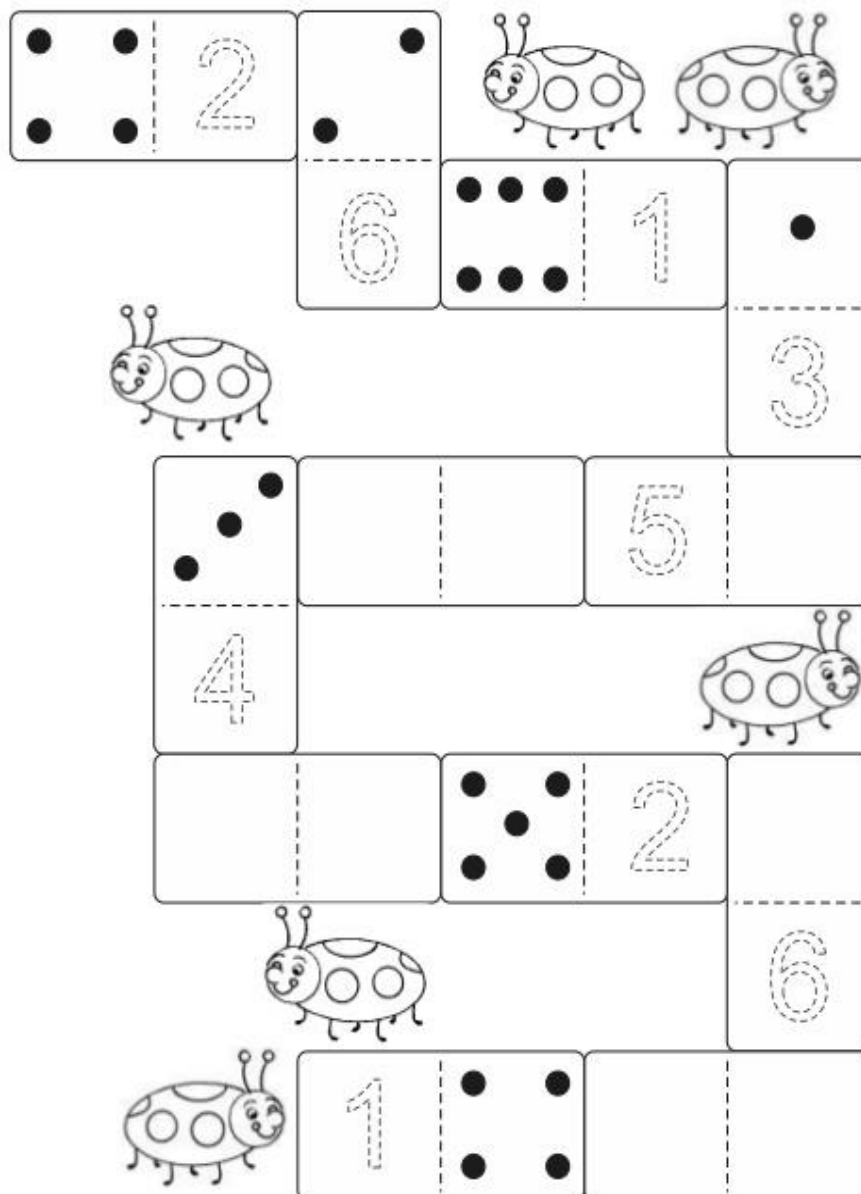
1. Cuenta los puntos de cada cuadrado y súmalos; luego, escribe los resultados:

		
+	+	+
		
—	—	—
		

		
+	+	+
		
—	—	—
		

EL JUEGO DEL DOMINÓ

- Delinea con color los números punteados.
- Completa cada ficha con mucha atención.
- Colorea los bichitos que caminan hacia la izquierda.






¿Cuántas pelotas de tenis hay?



5



4




2



4



• Une cada figura con el objeto que sirve para dibujarla



Nombre _____ Fecha _____

Nombre: _____ Fecha: _____

Ficha 9: Contabiliza los números que están en la matriz.

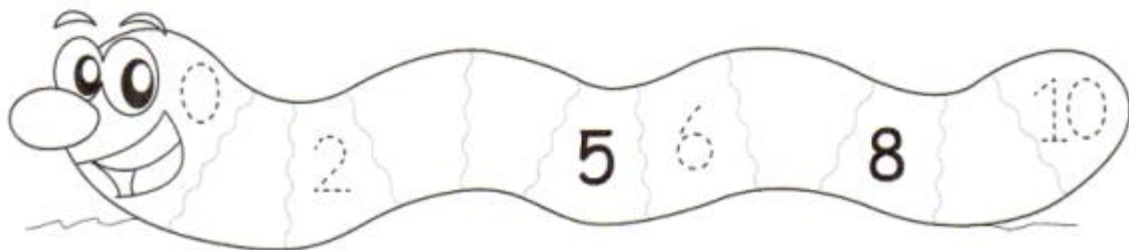
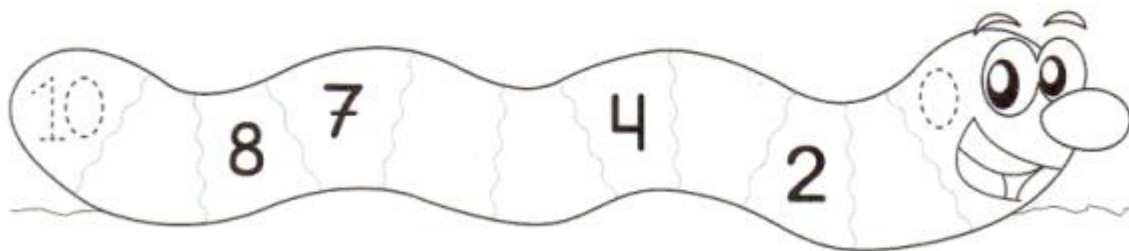
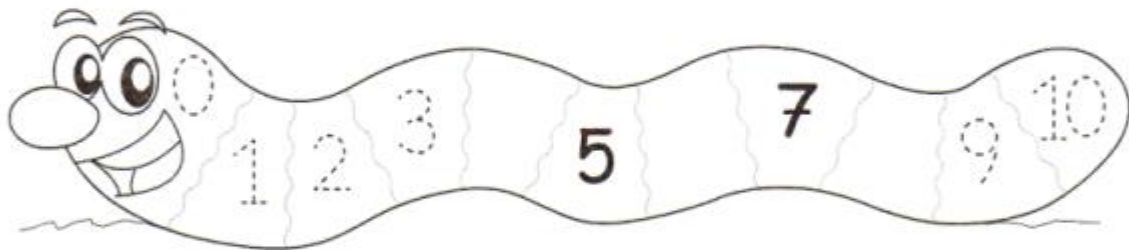
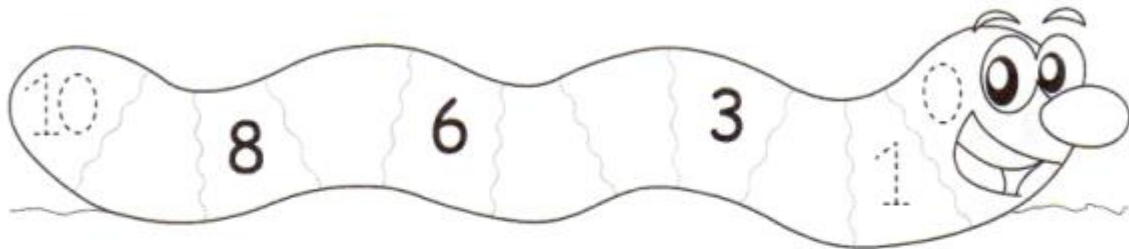
4	1	5	1	1
4	1	2	3	1
2	1	2	5	5
3	1	2	1	2
5	3	1	4	5

números				
1	2	3	4	5

Secuencia numérica

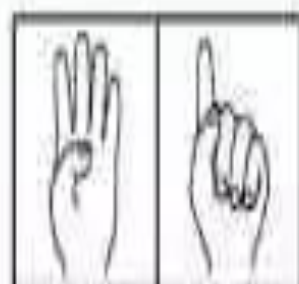
Capacidad: Lee y escribe números del 0 al 10.

1. Escribe los números que faltan para completar la secuencia numérica:

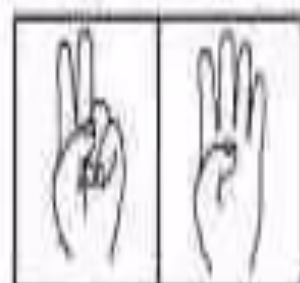




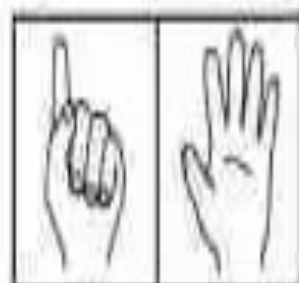
$$\square + \square = \square$$




$$\square + \square = \square$$



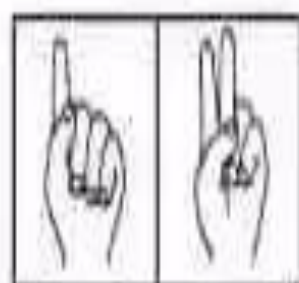
$$\square + \square = \square$$



$$\square + \square = \square$$





$$\square + \square = \square$$





$$\square + \square = \square$$









+ =





+ =





+ =



+ =



+ =



+ =



CUADERNO DE TRABAJO

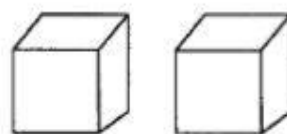


¡Contando!

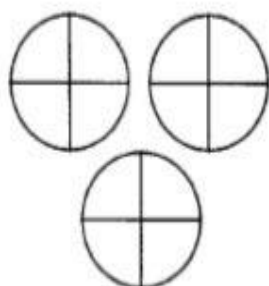
☺ Cuenta y luego encierra el número que le corresponde. Colorea.




1	2	3
---	---	---




1	2	3
---	---	---




1	2	3
---	---	---



4	5	6
---	---	---



4	5	6
---	---	---



4	5	6
---	---	---

- Rodea el número mayor.

1 2

8 7

4 5

5 4

6 5

1 3

8 5

4 2

5 2

8 3

4 3

6 4

3 2

9 0

8 7

Nombre: Fecha:

Nombre:

Fecha:

FICHA DE REFUERZO

SUMAS

8	6	7	2	1	4
+1	+2	+1	+5	+7	+5
<hr/>	<hr/>	<hr/>	<hr/>	<hr/>	<hr/>

5	8	3	5	9	6
+4	+0	+4	+1	+0	+3
<hr/>	<hr/>	<hr/>	<hr/>	<hr/>	<hr/>

4	8	6	3	2	7
+3	+1	+2	+6	+7	+2
<hr/>	<hr/>	<hr/>	<hr/>	<hr/>	<hr/>

1	3	0	0	5	9
+8	+3	+6	+7	+3	+0
<hr/>	<hr/>	<hr/>	<hr/>	<hr/>	<hr/>

Nombre: _____ Fecha: _____

Ficha 1: Repasar y completar las grafías. Únelas mediante flechas con la regleta correspondiente

1 1 1 1 1



2 2 2 2 2



3 3 3 3 3



4 4 4 4 4




5 5 5 5 5







¿Cuántos corazones hay?




6



3




2



5



Empty box for writing the number



Empty box for writing the number

FICHA Nº

NOMBRE _____

$$\begin{array}{r} 7 \\ + 9 \\ \hline \end{array}$$

$$\begin{array}{r} 5 \\ + 5 \\ \hline \end{array}$$

$$\begin{array}{r} 4 \\ + 1 \\ \hline \end{array}$$

$$\begin{array}{r} 1 \\ + 4 \\ \hline \end{array}$$

$$\begin{array}{r} 2 \\ + 1 \\ \hline \end{array}$$

$$\begin{array}{r} 5 \\ + 1 \\ \hline \end{array}$$

$$\begin{array}{r} 5 \\ + 5 \\ \hline \end{array}$$

$$\begin{array}{r} 9 \\ + 8 \\ \hline \end{array}$$

$$\begin{array}{r} 7 \\ + 8 \\ \hline \end{array}$$

$$\begin{array}{r} 1 \\ + 3 \\ \hline \end{array}$$

$$\begin{array}{r} 8 \\ + 2 \\ \hline \end{array}$$

$$\begin{array}{r} 7 \\ + 4 \\ \hline \end{array}$$

$$\begin{array}{r} 4 \\ + 8 \\ \hline \end{array}$$

$$\begin{array}{r} 5 \\ + 2 \\ \hline \end{array}$$

$$\begin{array}{r} 9 \\ + 7 \\ \hline \end{array}$$

$$\begin{array}{r} 1 \\ + 5 \\ \hline \end{array}$$

$$\begin{array}{r} 8 \\ + 8 \\ \hline \end{array}$$

$$\begin{array}{r} 9 \\ + 7 \\ \hline \end{array}$$

$$\begin{array}{r} 1 \\ + 3 \\ \hline \end{array}$$

$$\begin{array}{r} 1 \\ + 6 \\ \hline \end{array}$$

$$\begin{array}{r} 4 \\ + 8 \\ \hline \end{array}$$




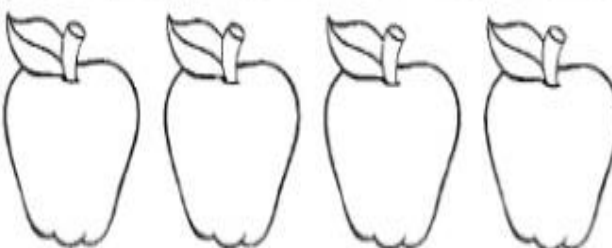
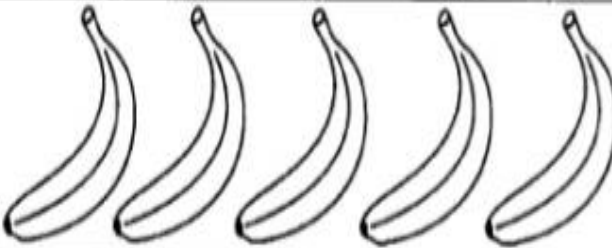
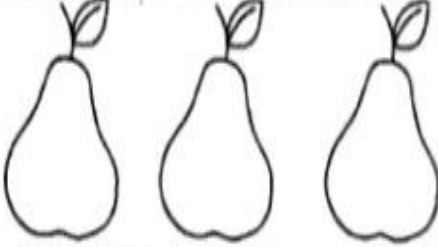
$$\begin{array}{r} 4 \\ + 8 \\ \hline \end{array}$$

$$\begin{array}{r} 6 \\ + 5 \\ \hline \end{array}$$

$$\begin{array}{r} 4 \\ + 9 \\ \hline \end{array}$$


¡A contar!

😊 Encierre la cantidad correcta.

1 2 3 4 5	
1 2 3 4 5	
1 2 3 4 5	
1 2 3 4 5	
1 2 3 4 5	
1 2 3 4 5	


A sumar...o

* Suma:





+

=



+

=




+

=

Nombre: _____

Sumas de verano



$$\begin{array}{r} 3 \\ + 1 \\ \hline \end{array}$$

$$\begin{array}{r} 9 \\ + 1 \\ \hline \end{array}$$

$$\begin{array}{r} 2 \\ + 2 \\ \hline \end{array}$$

$$\begin{array}{r} 7 \\ + 2 \\ \hline \end{array}$$

$$\begin{array}{r} 6 \\ + 3 \\ \hline \end{array}$$

$$\begin{array}{r} 1 \\ + 3 \\ \hline \end{array}$$

$$\begin{array}{r} 9 \\ + 2 \\ \hline \end{array}$$

$$\begin{array}{r} 7 \\ + 3 \\ \hline \end{array}$$

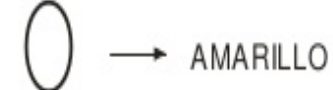
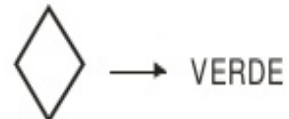
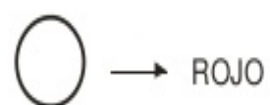
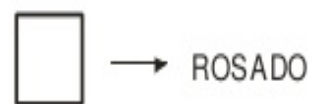

$$\begin{array}{r} 4 \\ + 1 \\ \hline \end{array}$$

$$\begin{array}{r} 1 \\ + 7 \\ \hline \end{array}$$

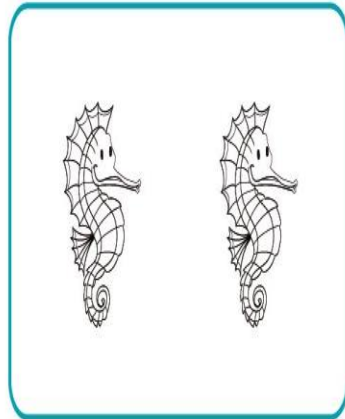
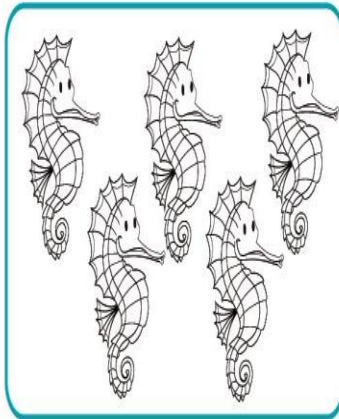
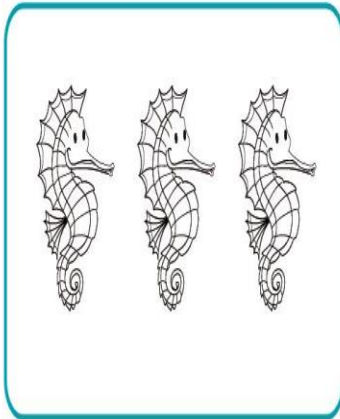
$$\begin{array}{r} 7 \\ + 5 \\ \hline \end{array}$$

$$\begin{array}{r} 5 \\ + 4 \\ \hline \end{array}$$

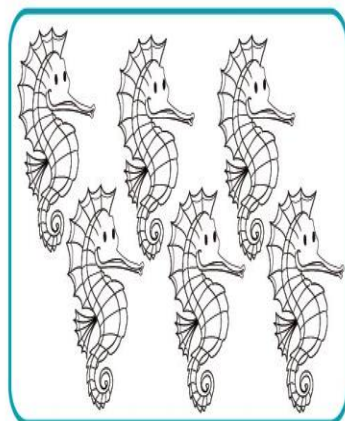
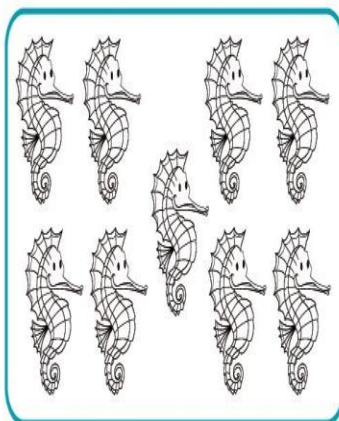
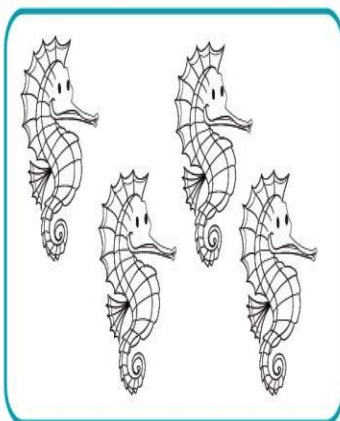
Reconoce las formas geométricas, píntalas de acuerdo a las indicaciones y cuenta cuántas hay de cada una



¿Cuántos caballitos hay? Une los dibujos con su número.



1 2 3 4 5 6 7 8 9 10



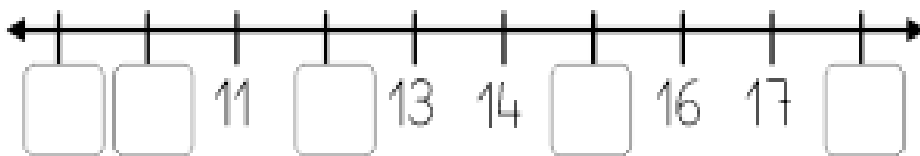
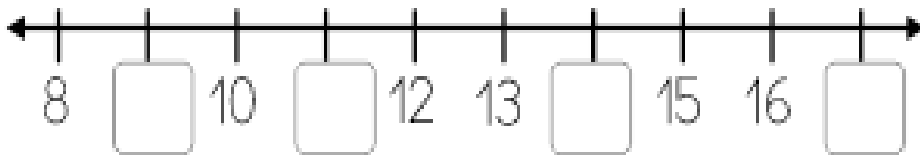
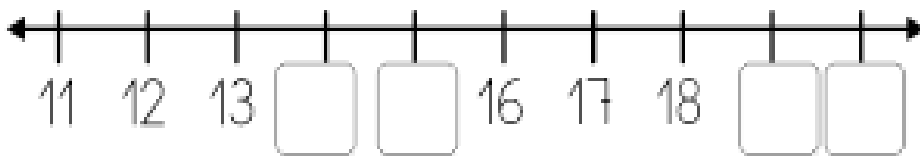
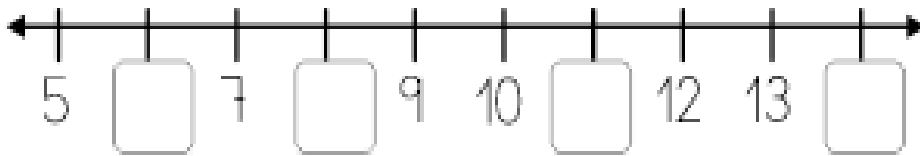
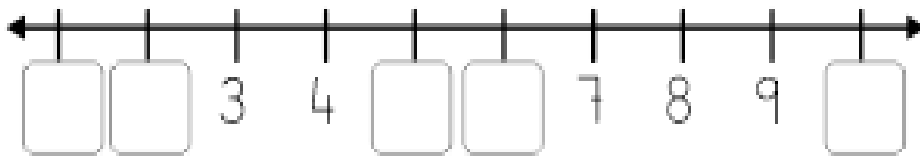
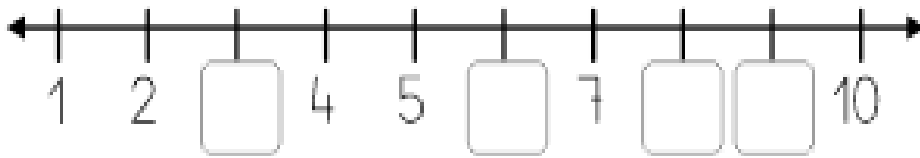



ACTIVIDAD: **CONTAR HASTA 20**


Nombre:

Fecha:

Escribe los números que faltan:

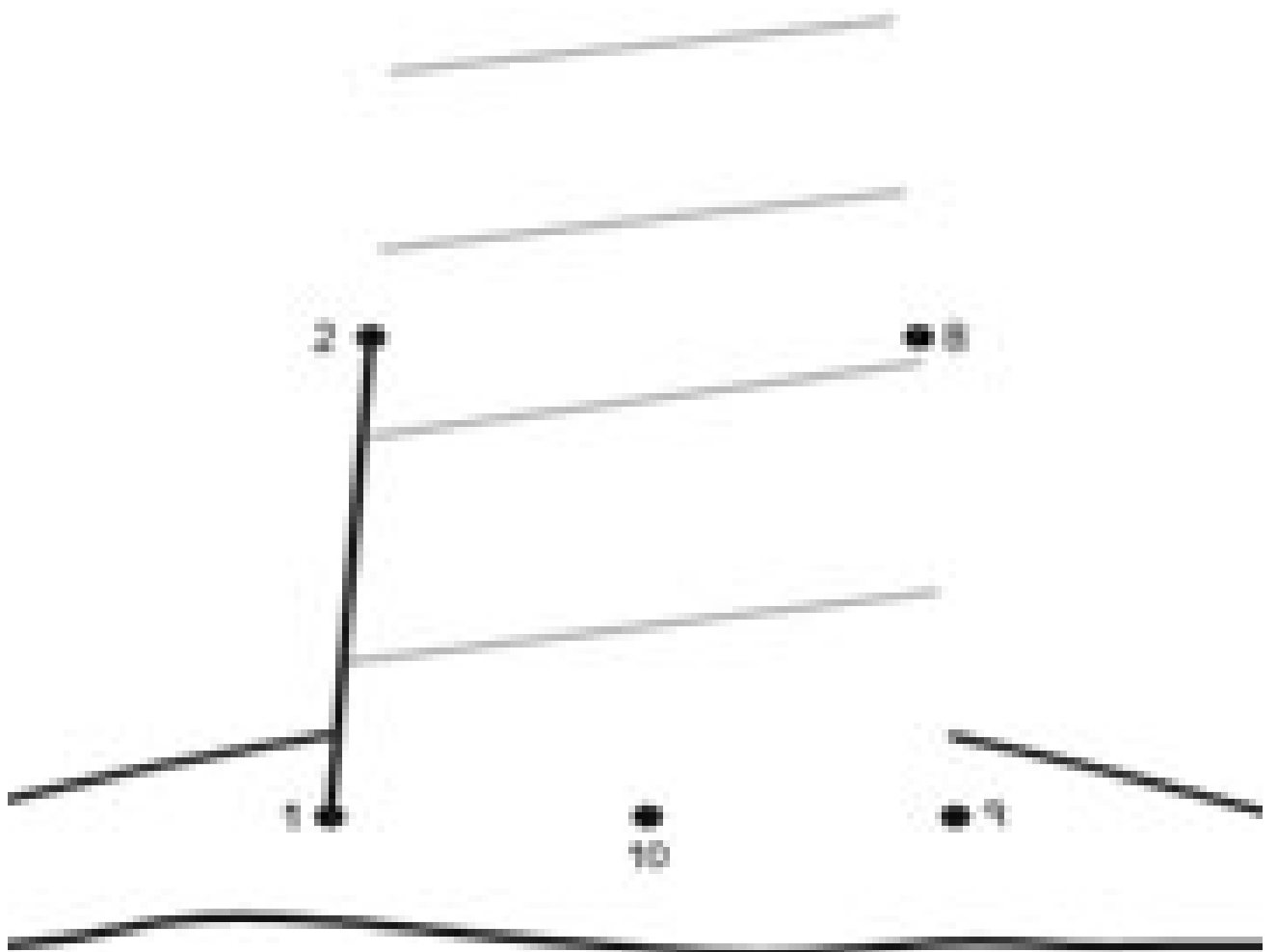


¿Qué número va después de ... ? ... ¿Y antes de ... ?

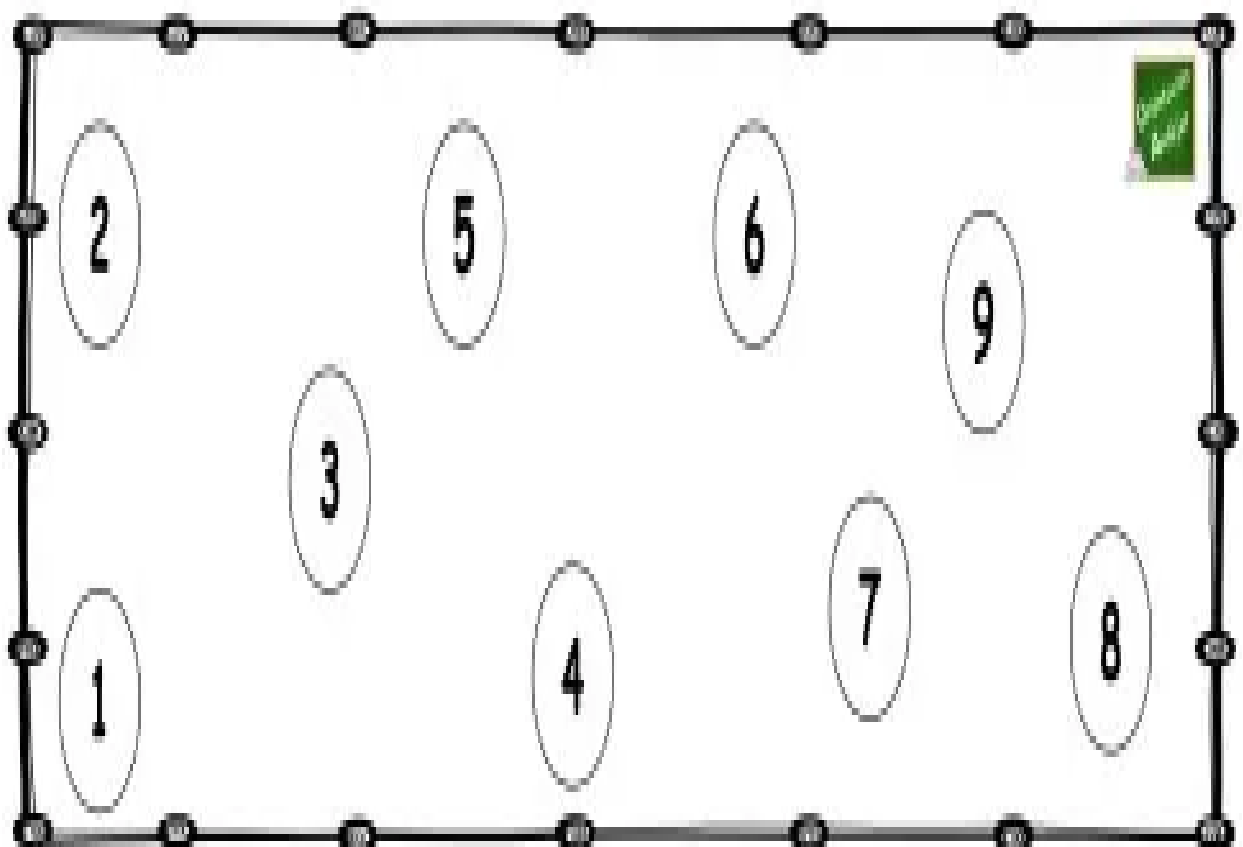
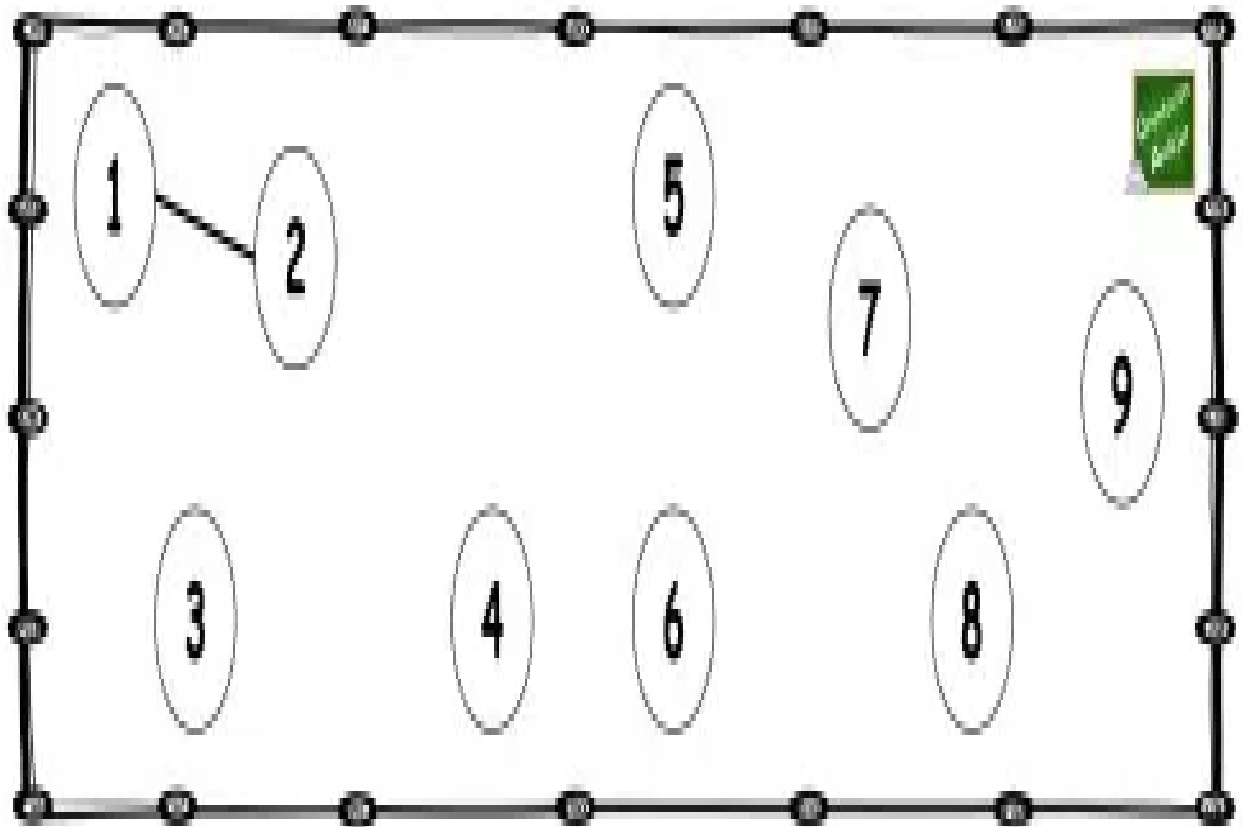


3 ●

● 7


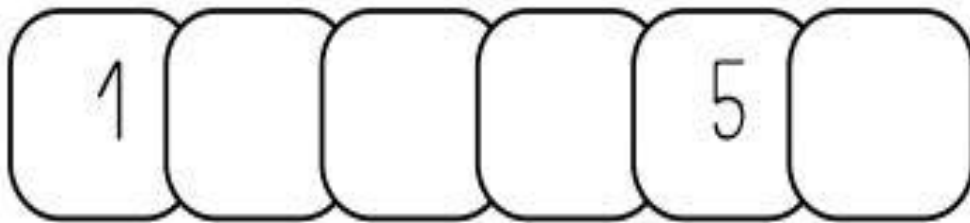
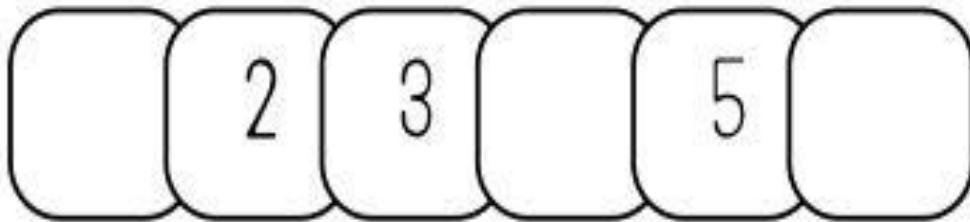
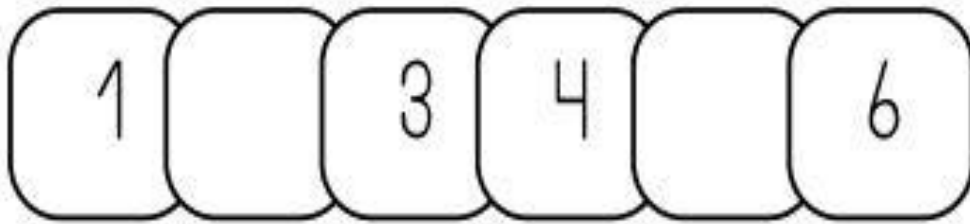


Une los números en orden ascendente





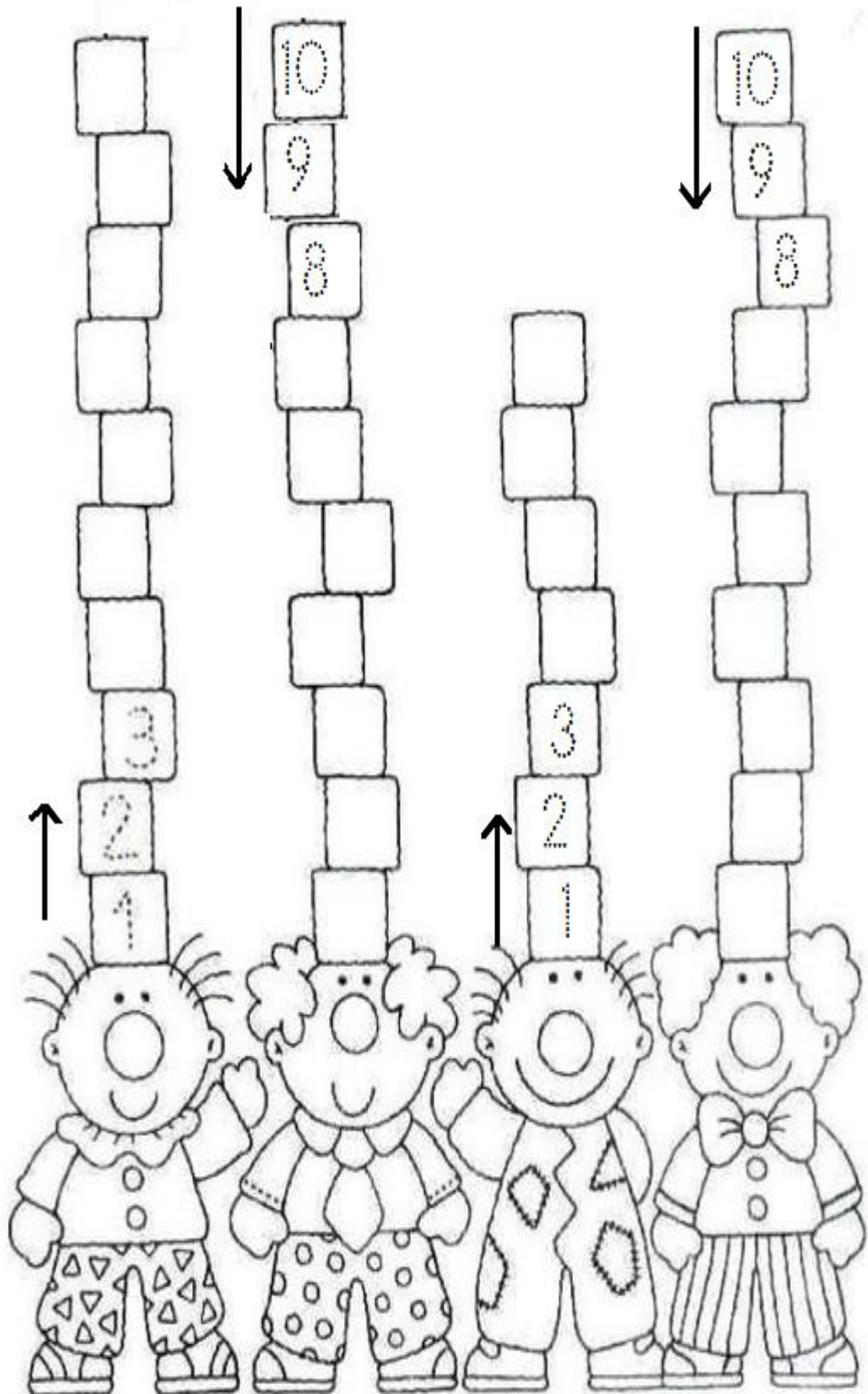
COMPLETA LA SERIE NUMÉRICA



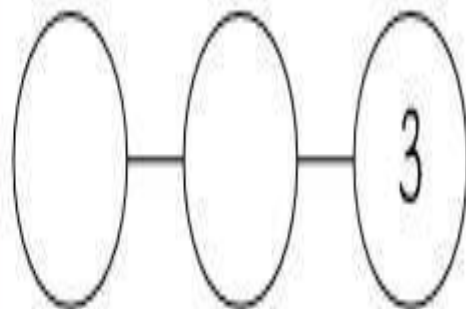
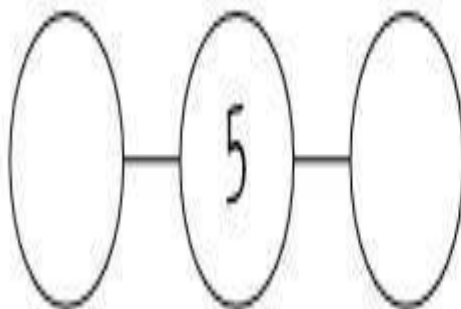
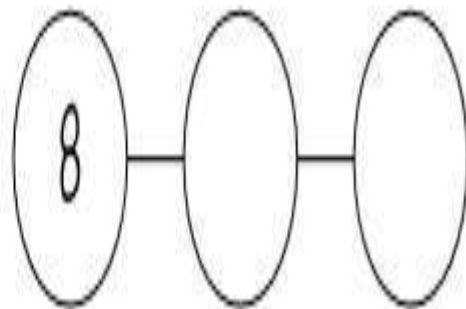
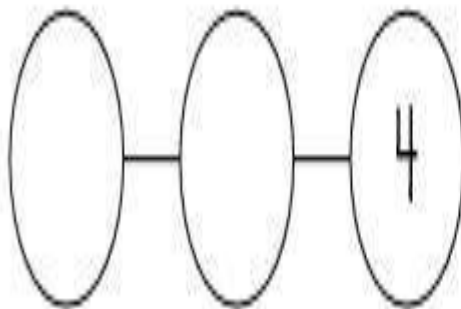
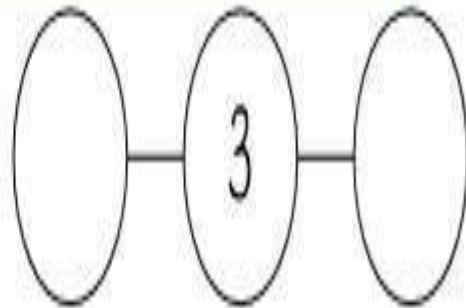
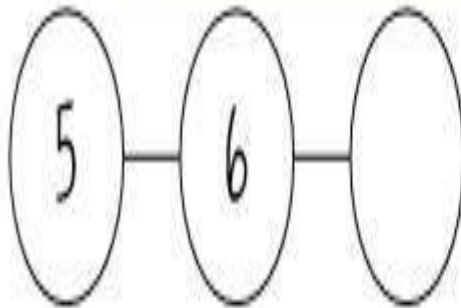
Payasos Divertidos

Complete las series de manera ascendente y descendente según se le solicita.


Coleree los payasos que tienen una decena de cubos.



Completa contando o descontando.



Une los números de **mayor a menor**:



10

5

1

8

3

7

6

9

4

2



ORDENA LOS NÚMEROS



1 3 7

1 7

2 4 6

5 3 1

0 2 5

5 4 1

2 4 6

5 6 7

4 5 8

2 0 5

- Ordena los siguientes números:

0 - 1 - 2 - 3 - 4 - 5 - 6 - 7 - 8 - 9

3 - 1 - 2



5 - 4 - 3



4 - 3 - 2



4 - 6 - 5



Ordena los números de menor a mayor
en cada barra



4 5
3 1
0 2

--	--	--	--	--	--	--

Ordena los números de menor a mayor
en cada barra

8 7
9
10 6



--	--	--	--	--	--	--

6 9
7 8
10



--	--	--	--	--	--	--



6 8 9
10 7 5
4 11

--	--	--	--	--	--	--



6 8 9
11 4
10 7 5

--	--	--	--	--	--	--

5 2
3 1
0 4



--	--	--	--	--	--	--