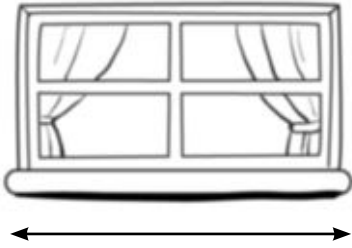


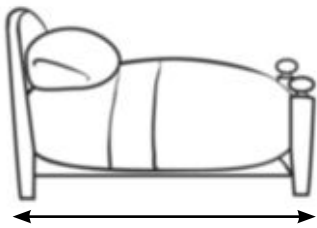
Nombre _____ Fecha _____

1 ¿Cuánto crees que mide cada objeto? Une.



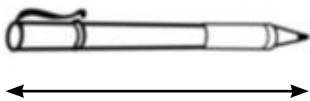
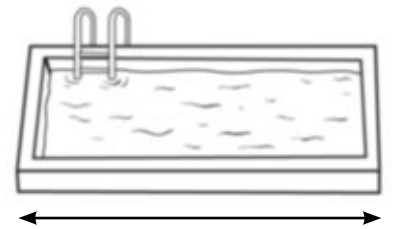
4 palmos

10 palmos




20 pasos

5 pasos

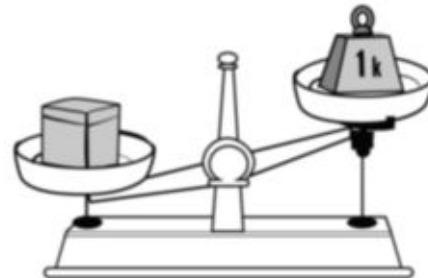
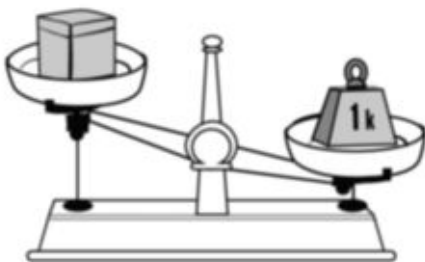


8 centímetros

18 centímetros



2 Observa y rodea el paquete que pesa más de un kilo.



3 Dibuja un recipiente en el que quepa más de un litro.



4 Completa. Después, escribe cómo se lee cada número.

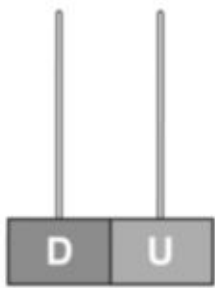
12 ▶ + = ▶

27 ▶ + = ▶

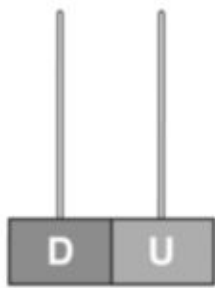
35 ▶ + = ▶

38 ▶ + = ▶

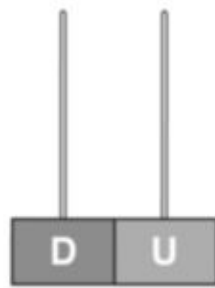
5 Completa los ábacos.



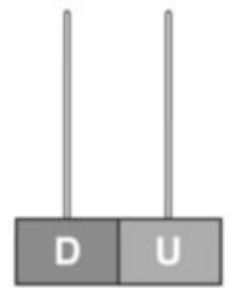
27



31



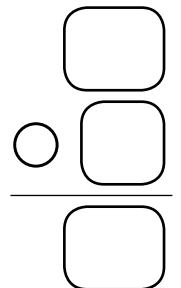
36



39

6 Piensa si has de sumar o de restar y resuelve.

Una cuerda mide 18 centímetros de largo.
Si le cortamos 7 centímetros, ¿cuántos centímetros de cuerda quedan?



Solución ▶