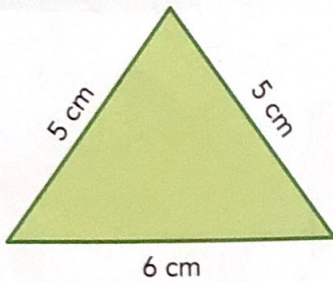
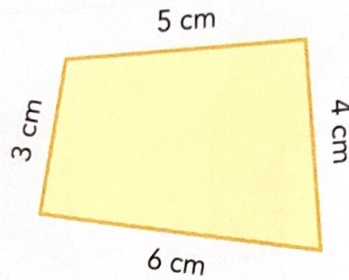


## Tema 10

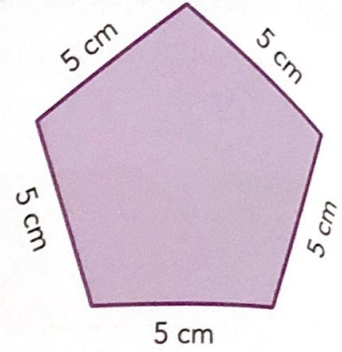
6. Calcula mentalmente el perímetro de cada figura:



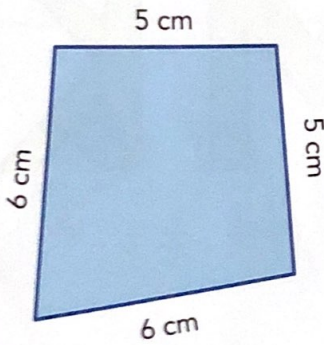
perímetro: ..... cm



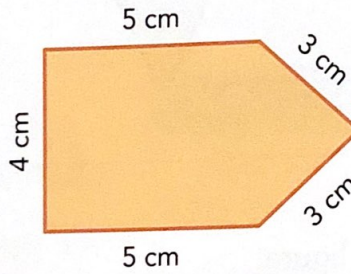
perímetro: ..... cm



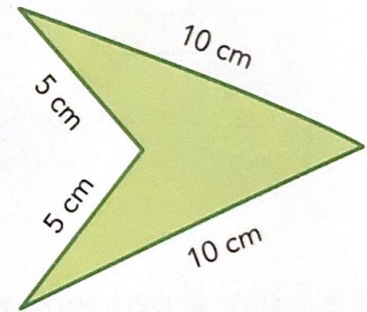
perímetro: ..... cm



perímetro: ..... cm

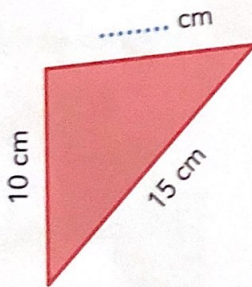


perímetro: ..... cm

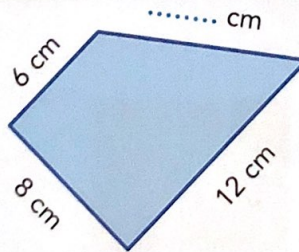


perímetro: ..... cm

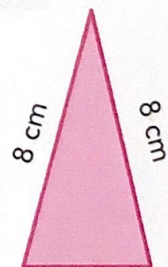
7. Observa el perímetro y calcula el dato que falta:



perímetro: 35 cm



perímetro: 36 cm



perímetro: 20 cm