

7. Suma.

$$\begin{array}{r} 676 \\ + 54 \\ \hline \end{array}$$

$$\begin{array}{r} 553 \\ + 327 \\ \hline \end{array}$$

$$\begin{array}{r} 362 \\ + 516 \\ \hline \end{array}$$

$$\begin{array}{r} 489 \\ + 41 \\ \hline \end{array}$$

$$\begin{array}{r} 342 \\ + 367 \\ \hline \end{array}$$

$$\begin{array}{r} 289 \\ + 378 \\ \hline \end{array}$$

$$\begin{array}{r} 760 \\ + 229 \\ \hline \end{array}$$

$$\begin{array}{r} 207 \\ + 677 \\ \hline \end{array}$$

$$\begin{array}{r} 621 \\ + 365 \\ \hline \end{array}$$

$$\begin{array}{r} 339 \\ + 192 \\ \hline \end{array}$$

8. Resta.

$$\begin{array}{r} 437 \\ - 287 \\ \hline \end{array}$$

$$\begin{array}{r} 640 \\ - 345 \\ \hline \end{array}$$

$$\begin{array}{r} 842 \\ - 579 \\ \hline \end{array}$$

$$\begin{array}{r} 379 \\ - 145 \\ \hline \end{array}$$

$$\begin{array}{r} 821 \\ - 765 \\ \hline \end{array}$$

$$\begin{array}{r} 810 \\ - 78 \\ \hline \end{array}$$

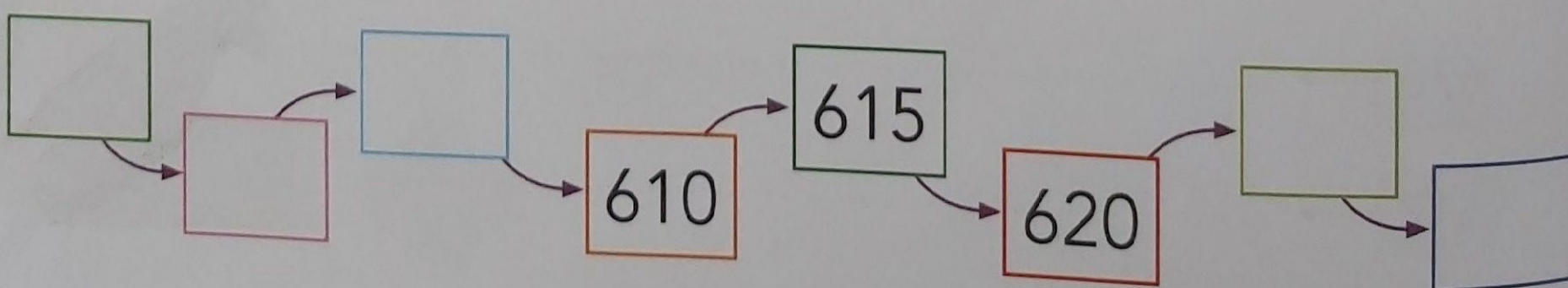
$$\begin{array}{r} 712 \\ - 394 \\ \hline \end{array}$$

$$\begin{array}{r} 585 \\ - 271 \\ \hline \end{array}$$

$$\begin{array}{r} 803 \\ - 275 \\ \hline \end{array}$$

$$\begin{array}{r} 982 \\ - 95 \\ \hline \end{array}$$

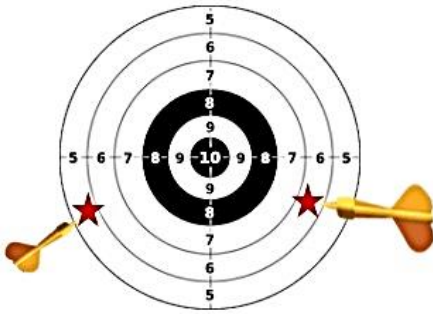
9. Completa la serie.



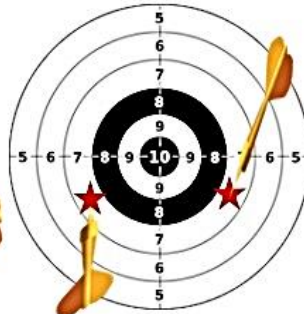
Nombre:

Fecha:

1 ¿Cuántos puntos ha conseguido?



= _____

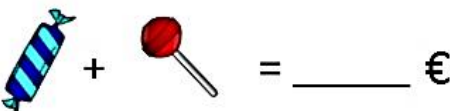
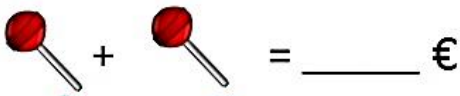
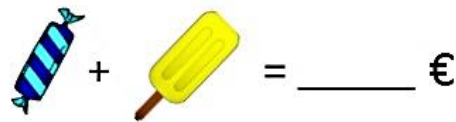


= _____



= _____

2 ¿Cuánto cuestan?



3 Resuelve cada cadena.

