

4. Resta.

$$\begin{array}{r} 758 \\ - 486 \\ \hline \end{array}$$

.....

$$\begin{array}{r} 435 \\ - 427 \\ \hline \end{array}$$

.....

$$\begin{array}{r} 609 \\ - 356 \\ \hline \end{array}$$

.....

$$\begin{array}{r} 919 \\ - 479 \\ \hline \end{array}$$

.....

$$\begin{array}{r} 470 \\ - 291 \\ \hline \end{array}$$

.....

$$\begin{array}{r} 503 \\ - 299 \\ \hline \end{array}$$

.....

$$\begin{array}{r} 490 \\ - 267 \\ \hline \end{array}$$

.....

$$\begin{array}{r} 372 \\ - 108 \\ \hline \end{array}$$

.....

$$\begin{array}{r} 830 \\ - 357 \\ \hline \end{array}$$

.....

$$\begin{array}{r} 738 \\ - 659 \\ \hline \end{array}$$

.....

$$\begin{array}{r} 964 \\ - 29 \\ \hline \end{array}$$

.....

$$\begin{array}{r} 111 \\ - 30 \\ \hline \end{array}$$

.....

$$\begin{array}{r} 228 \\ - 168 \\ \hline \end{array}$$

.....

$$\begin{array}{r} 561 \\ - 255 \\ \hline \end{array}$$

.....

$$\begin{array}{r} 635 \\ - 157 \\ \hline \end{array}$$

.....

5. Continúa las series.

592	594	596					
609	607	605					

6. Escribe con letras.

670 →

617 →

607 →



16. Rodea el número que indica cada uno.



Es mayor
que 525.

523 528 521



Es menor
que 400.

420 530 350




Es menor
que 180.

186 168 185



Es mayor
que 290.

130 330 250



Es mayor
que 656.

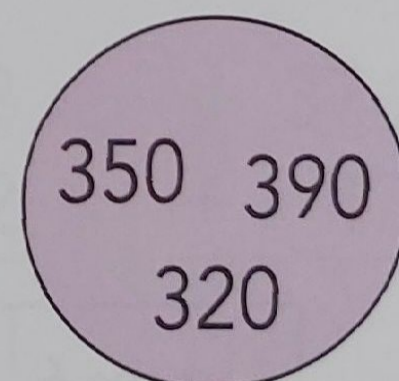


651 631 661



Es menor
que 450.

685 445 513

17. Rodea el número mayor de cada bolsa.



18. Escribe el signo $<$ o $>$.

648 652

554 545

246 546

696 669

607 618

426 406