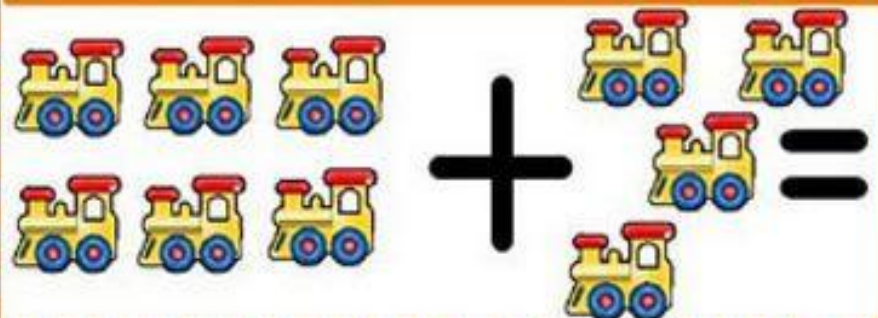
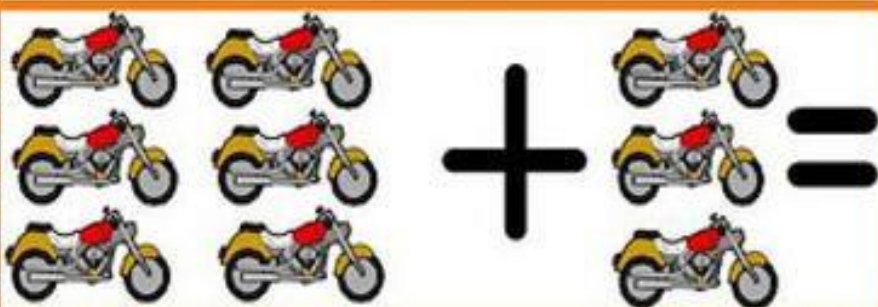
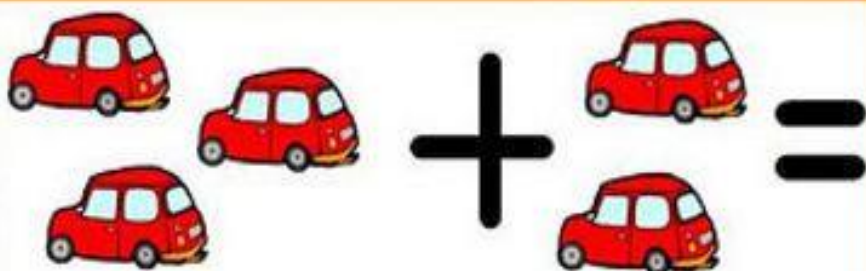
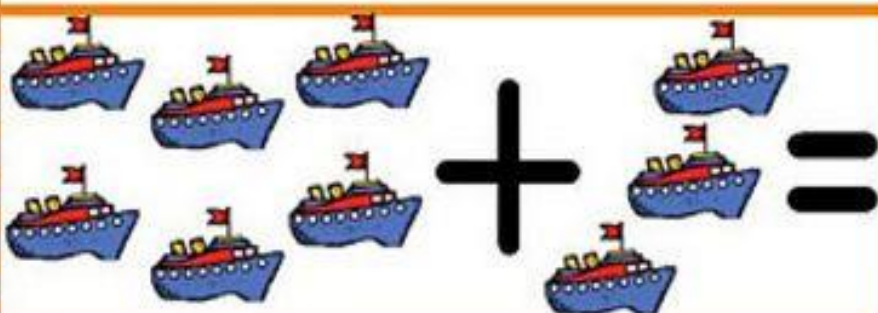
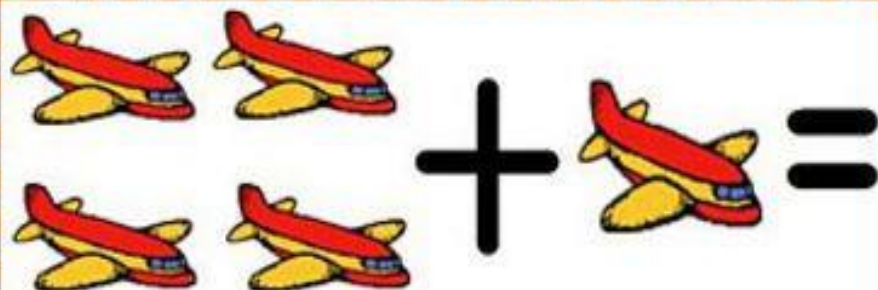
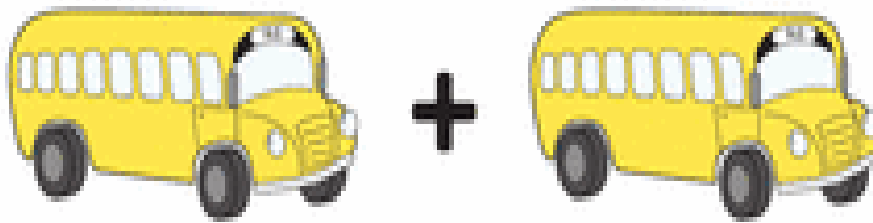


S U M A S



1




$$\begin{array}{r} 1 \\ +1 \\ \hline \end{array}$$

2



$$\begin{array}{r} 2 \\ +3 \\ \hline \end{array}$$

3



$$\begin{array}{r} 4 \\ +2 \\ \hline \end{array}$$

4



$$\begin{array}{r} 3 \\ +1 \\ \hline \end{array}$$

RODEA LA RESPUESTA CORRECTA




**NECESITO RUEDAS  
PARA  
CIRCULAR.  
TE LLEVO  
A LOS SITIOS  
SIN PEDALEAR.**



ESCRIBE EL NOMBRE DE LOS MEDIOS DE TRANSPORTE



Empty rectangular box for writing the name of the bicycle.



Empty rectangular box for writing the name of the train.



Empty rectangular box for writing the name of the bus.



Empty rectangular box for writing the name of the sailboat.



Empty rectangular box for writing the name of the car.



Empty rectangular box for writing the name of the airplane.