

TRABALLO DE INGLÉS 4º DE PRIMARIA

Monday, 15th June 2020.

Hello everyone!

En esta última semana de curso vamos a repasar la hora **“THE TIME”**
Para preguntar qué hora es se puede decir de dos maneras como veis en el recuadro. Para responder siempre se empieza por It is... (It's ...)

What time is it? // What's the time? ¿Qué hora es?
It's Es la una /Son las 4.

- Para responder a las horas **“en punto”** utilizamos **“o'clock”**.
It's + (hora) + o'clock. Ex: It's six o'clock (Son las seis en punto)
- Para responder a **“y media”** utilizamos **“half past”** delante de la hora. Ex: It's **half past** six. (Son las seis y media)
- Para responder a **“y cuarto”** utilizamos **“quarter past”** delante de la hora. Ex: It's **quarter past** six. (Son las seis y cuarto)
- Para responder a **“menos cuarto”** utilizamos **“quarter to”** delante de la hora. Ex: It's **quarter to** six. (Son las seis menos cuarto)
- Para decir los minutos que pasan de una hora decimos **It's +(minutos) + past + (hora).** Ex: It's **ten past** two. (Son las dos y diez).
- Para decir los minutos que faltan para una hora decimos **It's + (minutos) + to + (hora).** Ex: It's **ten to** two.

Os envío de nuevo un enlace dónde se explica muy bien la hora y otro para practicar online.

<https://www.youtube.com/watch?v=-bnbKgQI9h0>

<https://agendaweb.org/vocabulary/time-exercises.html>

A continuación os adjunto dos fichas de repaso.

No os agobiéis si no lo entendéis muy bien, pues se volverá a explicar el próximo curso. Os deseo un muy buen verano a tod@s!!

HAPPY SUMMER !!

Kisses.

Carmela.

WHAT TIME IS IT?

Look and match.



half past eleven



half past eight



four o'clock



a quarter past twelve



a quarter to two



a quarter past nine



a quarter to seven



one o'clock

Name: _____

What Time is It?

Directions: Look at the clocks below. What time is it? Write the digital times beneath the clocks.

1.



2.



3.



4.



5.



6.



7.



8.



9.



10.



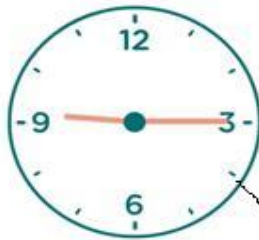
11.



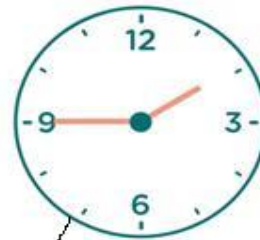
12.



WHAT TIME IS IT?



half past eleven



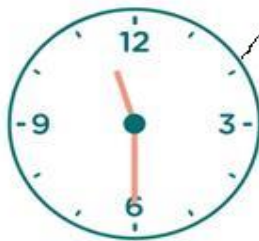
half past eight



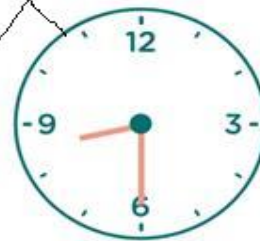
four o'clock



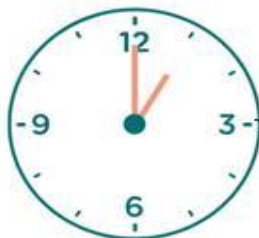
a quarter past twelve



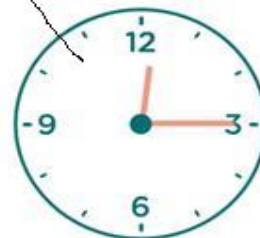
a quarter to two



a quarter past nine



one o'clock



a quarter to seven

ANSWERS (Ficha 2)

What time is it?

1. It's five to two.
2. It's twenty past three.
3. It's ten to twelve.
4. It's ten to eight.
5. It's ten past six.
6. It's quarter past four.
7. It's ten to six.
8. It's two o'clock.
9. It's ten to ten.
10. It's twenty past seven.
11. It's five past twelve.
12. It's five past eight.