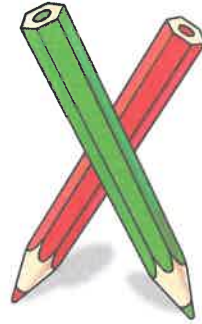


Multiplicaciones sin llevar

1 Calcula.

$$\begin{array}{r} 41 \\ \times 2 \\ \hline \end{array}$$

$$\begin{array}{r} 23 \\ \times 3 \\ \hline \end{array}$$



$$\begin{array}{r} 132 \\ \times 2 \\ \hline \end{array}$$


$$\begin{array}{r} 102 \\ \times 3 \\ \hline \end{array}$$

$$\begin{array}{r} 83 \\ \times 2 \\ \hline \end{array}$$

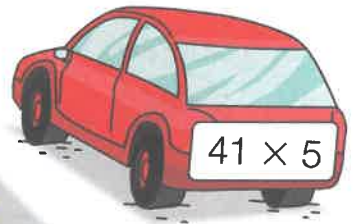
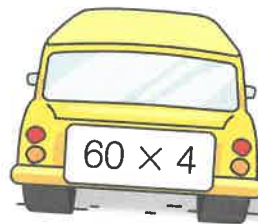
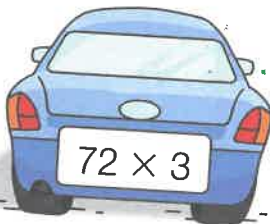
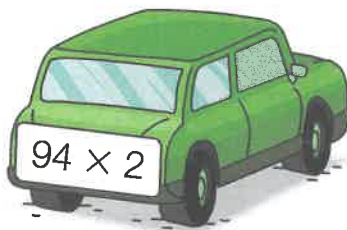
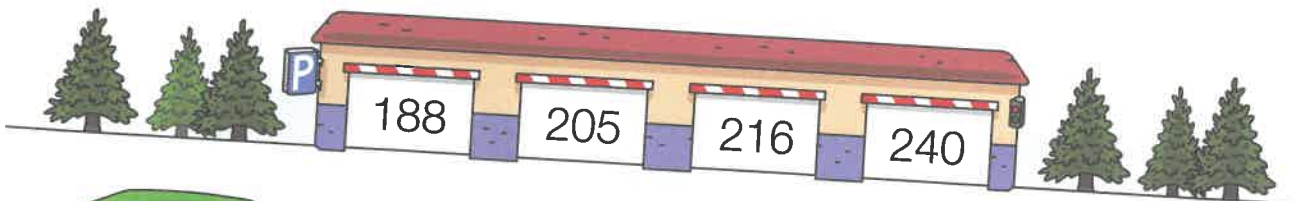
$$\begin{array}{r} 71 \\ \times 3 \\ \hline \end{array}$$

$$\begin{array}{r} 52 \\ \times 4 \\ \hline \end{array}$$

$$\begin{array}{r} 90 \\ \times 5 \\ \hline \end{array}$$



2 ¿A qué garaje va cada coche? Coloca los números y multiplica. Después, relaciona y colorea igual.



Calcula aquí las multiplicaciones.

