

1 Completa la tabla.


Número	Descomposición	Lectura
506		
	$7C + 2D + 4U$	
813		
	$9C + 7D$	
490		

2 Calcula.


$624 + 354$



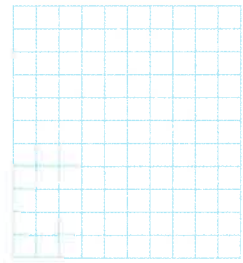
$624 + 235$



$763 - 142$



$691 - 482$



$2 \times 4 = \square$

$2 \times 7 = \square$

$5 \times 0 = \square$

$5 \times 9 = \square$

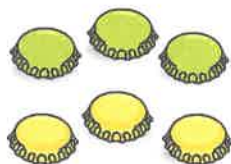

$2 \times 6 = \square$

$2 \times 9 = \square$

$5 \times 3 = \square$


$5 \times 8 = \square$

3 Cuenta y completa.



$\square + \square + \square + \square = \square$

$\square \times \square = \square$



$\square \times \square = \square$