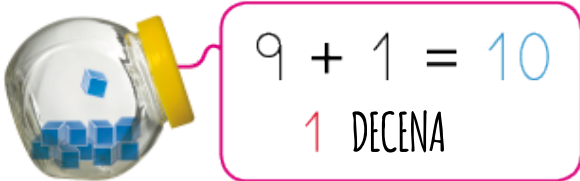




# UNIDADES E DECENAS



9 + 1 = 10  
1 DECENA



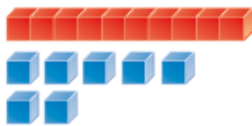
10 UNIDADES



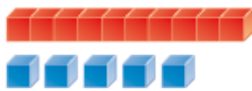
1 DECENA



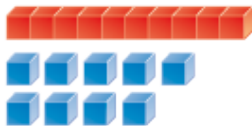
1 DECENA E 2 UNIDADES → 12




.... DECENA E ..... UNIDADES → .....



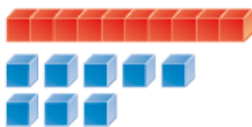
.... DECENA E ..... UNIDADES → .....



.... DECENA E ..... UNIDADES → .....




.... DECENA E ..... UNIDADES → .....




.... DECENA E ..... UNIDADES → .....

ESCRIBE O NÚMERO QUE CORRESPONDA






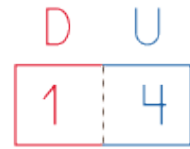




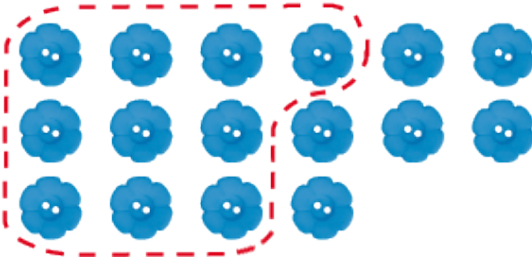
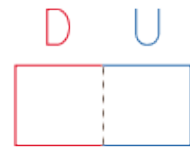




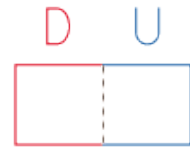
1 DECENA E  
4 UNIDADES




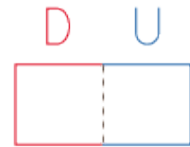
..... DECENA E  
..... UNIDADES



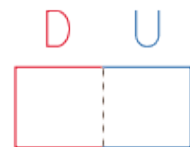
..... DECENA E  
..... UNIDADES



..... DECENA E  
..... UNIDADES



..... DECENA E  
..... UNIDADES



CANTAS HAI?

