


NOME _____ DÍA _____

1. Colorea os espacios con números maiores que 590 e menores que 700, daquela verás o debuxo.



2. Arrodeia os números de 6 en 6 e risca de 9 en 9.

1	2	3	4	5	6	7	8	9	10
11	12	13	14	15	16	17	18	19	20
21	22	23	24	25	26	27	28	29	30
31	32	33	34	35	36	37	38	39	40
41	42	43	44	45	46	47	48	49	50
51	52	53	54	55	56	57	58	59	60
61	62	63	64	65	66	67	68	69	70
71	72	73	74	75	76	77	78	79	80
81	82	83	84	85	86	87	88	89	90
91	92	93	94	95	96	97	98	99	100

NOME _____ DÍA _____

1. Fai as sumas. Despois colorea os cadros que teñan un resultado maior que 500 de color vermello, e as que teñen un resultado entre 100 e 500, de color amarelo. Verás algo que dá olor.


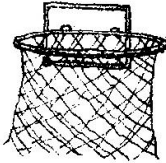
$\begin{array}{r} 312 \\ + 170 \\ \hline \end{array}$	$\begin{array}{r} 62 \\ + 34 \\ \hline \end{array}$	$\begin{array}{r} 72 \\ + 19 \\ \hline \end{array}$	$\begin{array}{r} 175 \\ + 243 \\ \hline \end{array}$	$\begin{array}{r} 61 \\ + 10 \\ \hline \end{array}$	$\begin{array}{r} 38 \\ + 54 \\ \hline \end{array}$	$\begin{array}{r} 122 \\ + 300 \\ \hline \end{array}$
$\begin{array}{r} 26 \\ + 38 \\ \hline \end{array}$	$\begin{array}{r} 417 \\ + 17 \\ \hline \end{array}$	$\begin{array}{r} 72 \\ + 12 \\ \hline \end{array}$	$\begin{array}{r} 161 \\ + 342 \\ \hline \end{array}$	$\begin{array}{r} 43 \\ + 34 \\ \hline \end{array}$	$\begin{array}{r} 321 \\ + 19 \\ \hline \end{array}$	$\begin{array}{r} 51 \\ + 12 \\ \hline \end{array}$
$\begin{array}{r} 54 \\ + 44 \\ \hline \end{array}$	$\begin{array}{r} 17 \\ + 23 \\ \hline \end{array}$	$\begin{array}{r} 312 \\ + 212 \\ \hline \end{array}$	$\begin{array}{r} 311 \\ + 142 \\ \hline \end{array}$	$\begin{array}{r} 371 \\ + 149 \\ \hline \end{array}$	$\begin{array}{r} 38 \\ + 12 \\ \hline \end{array}$	$\begin{array}{r} 47 \\ + 17 \\ \hline \end{array}$
$\begin{array}{r} 153 \\ + 47 \\ \hline \end{array}$	$\begin{array}{r} 211 \\ + 139 \\ \hline \end{array}$	$\begin{array}{r} 160 \\ + 214 \\ \hline \end{array}$	$\begin{array}{r} 632 \\ + 54 \\ \hline \end{array}$	$\begin{array}{r} 160 \\ + 160 \\ \hline \end{array}$	$\begin{array}{r} 310 \\ + 47 \\ \hline \end{array}$	$\begin{array}{r} 215 \\ + 38 \\ \hline \end{array}$
$\begin{array}{r} 32 \\ + 42 \\ \hline \end{array}$	$\begin{array}{r} 55 \\ + 12 \\ \hline \end{array}$	$\begin{array}{r} 321 \\ + 112 \\ \hline \end{array}$	$\begin{array}{r} 186 \\ + 200 \\ \hline \end{array}$	$\begin{array}{r} 161 \\ + 271 \\ \hline \end{array}$	$\begin{array}{r} 61 \\ + 12 \\ \hline \end{array}$	$\begin{array}{r} 32 \\ + 14 \\ \hline \end{array}$
$\begin{array}{r} 38 \\ + 27 \\ \hline \end{array}$	$\begin{array}{r} 172 \\ + 281 \\ \hline \end{array}$	$\begin{array}{r} 62 \\ + 31 \\ \hline \end{array}$	$\begin{array}{r} 314 \\ + 105 \\ \hline \end{array}$	$\begin{array}{r} 43 \\ + 15 \\ \hline \end{array}$	$\begin{array}{r} 164 \\ + 321 \\ \hline \end{array}$	$\begin{array}{r} 70 \\ + 20 \\ \hline \end{array}$
$\begin{array}{r} 450 \\ + 18 \\ \hline \end{array}$	$\begin{array}{r} 24 \\ + 57 \\ \hline \end{array}$	$\begin{array}{r} 91 \\ + 8 \\ \hline \end{array}$	$\begin{array}{r} 284 \\ + 135 \\ \hline \end{array}$	$\begin{array}{r} 36 \\ + 5 \\ \hline \end{array}$	$\begin{array}{r} 42 \\ + 31 \\ \hline \end{array}$	$\begin{array}{r} 181 \\ + 309 \\ \hline \end{array}$

2. Fai as operacións e pon o signo adecuado: < = >

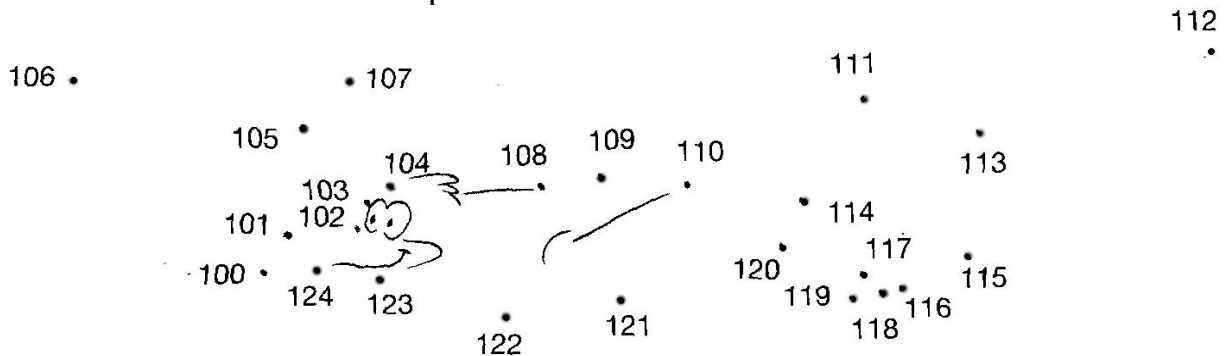
	5	+	4		1	7	+	2		1	6	+	8		4	+	1	7
8	+	1	7		6	+	1	9		1	5	-	3		1	7	-	6
2	2	-	4		1	7	-	6		8	+	1	2		1	4	+	4
1	0	+	7		4	+	1	1		1	4	+	7		8	+	9	

NOME _____ DÍA _____

1. Fai as restas. Se pintas os recadros con resultados menores de 500, verás o camiño da pelota á canastra.

	$\begin{array}{r} 681 \\ -435 \\ \hline \end{array}$	$\begin{array}{r} 972 \\ -140 \\ \hline \end{array}$	$\begin{array}{r} 623 \\ -111 \\ \hline \end{array}$	$\begin{array}{r} 884 \\ -271 \\ \hline \end{array}$
$\begin{array}{r} 698 \\ -133 \\ \hline \end{array}$	$\begin{array}{r} 779 \\ -731 \\ \hline \end{array}$	$\begin{array}{r} 933 \\ -412 \\ \hline \end{array}$	$\begin{array}{r} 861 \\ -217 \\ \hline \end{array}$	$\begin{array}{r} 825 \\ -132 \\ \hline \end{array}$
$\begin{array}{r} 891 \\ -390 \\ \hline \end{array}$	$\begin{array}{r} 612 \\ -505 \\ \hline \end{array}$	$\begin{array}{r} 347 \\ -312 \\ \hline \end{array}$	$\begin{array}{r} 932 \\ -130 \\ \hline \end{array}$	$\begin{array}{r} 981 \\ -342 \\ \hline \end{array}$
$\begin{array}{r} 612 \\ -100 \\ \hline \end{array}$	$\begin{array}{r} 972 \\ -251 \\ \hline \end{array}$	$\begin{array}{r} 938 \\ -138 \\ \hline \end{array}$	$\begin{array}{r} 521 \\ -120 \\ \hline \end{array}$	$\begin{array}{r} 946 \\ -132 \\ \hline \end{array}$
$\begin{array}{r} 842 \\ -240 \\ \hline \end{array}$	$\begin{array}{r} 864 \\ -186 \\ \hline \end{array}$	$\begin{array}{r} 868 \\ -333 \\ \hline \end{array}$	$\begin{array}{r} 197 \\ -190 \\ \hline \end{array}$	$\begin{array}{r} 818 \\ -113 \\ \hline \end{array}$
$\begin{array}{r} 685 \\ -139 \\ \hline \end{array}$	$\begin{array}{r} 786 \\ -205 \\ \hline \end{array}$	$\begin{array}{r} 672 \\ -104 \\ \hline \end{array}$	$\begin{array}{r} 412 \\ -111 \\ \hline \end{array}$	

2. Une os números empezando no 100.



NOME _____ DÍA _____

1-Arrodea os números de 7 en 7 e risca de 8 en 8.

1	2	3	4	5	6	7	8	9	10
11	12	13	14	15	16	17	18	19	20
21	22	23	24	25	26	27	28	29	30
31	32	33	34	35	36	37	38	39	40
41	42	43	44	45	46	47	48	49	50
51	52	53	54	55	56	57	58	59	60
61	62	63	64	65	66	67	68	69	70
71	72	73	74	75	76	77	78	79	80
81	82	83	84	85	86	87	88	89	90
91	92	93	94	95	96	97	98	99	100

2-Arrodea os números de 5 en 5 e risca de 10 en 10.

1	2	3	4	5	6	7	8	9	10
11	12	13	14	15	16	17	18	19	20
21	22	23	24	25	26	27	28	29	30
31	32	33	34	35	36	37	38	39	40
41	42	43	44	45	46	47	48	49	50
51	52	53	54	55	56	57	58	59	60
61	62	63	64	65	66	67	68	69	70
71	72	73	74	75	76	77	78	79	80
81	82	83	84	85	86	87	88	89	90
91	92	93	94	95	96	97	98	99	100


Escribe os números que estean arrodeados e que sexan maiores có 45 e menores có 85: _____

Escribe os números que estean arrodeados e riscados ao mesmo tempo:

NOME _____ DÍA _____

Resuelve las sumas e colorea los espacios donde estean los resultados correctos.

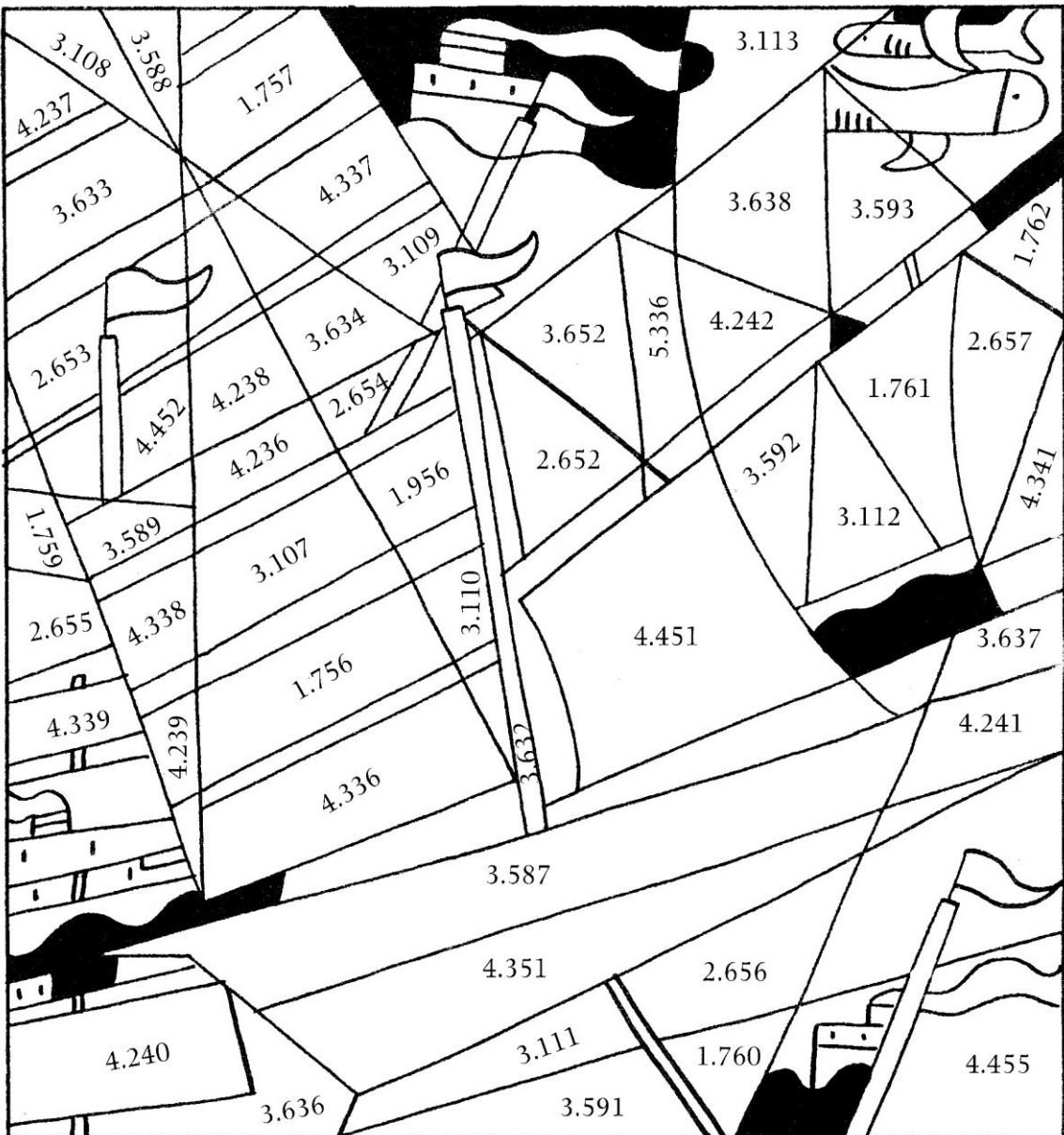
	4	3	2	4		2	0	7	6		8	7	6		2	8	0	6					
		5	0	8			1	5	4	9		9	8	4		3	5	7	0				
+	3	0	3	9		+	2	8	7	5		+	5	5	2	6		+	1	0	8	6	
	2	5	0	6		3	2	5	0		2	3	1	6		1	7	9	4				
	1	3	8	4		1	7	8	0		1	5	0	8			8	4	6				
+	1	9	3	6		+		9	2	5		+	1	3	4	0		+	3	0	6	8	



NOME _____ DÍA _____

Fai as restas e colorea os espazos onde estean os resultados correctos.


	5	6	2	4		7	2	0	8		4	0	8	2
-	1	3	8	4	-	3	5	7	6	-		9	7	5
	5	2	1	2		4	1	6	0		5	2	0	0
-	3	4	5	6	-	1	5	0	8	-		8	6	4
	6	3	9	4		6	3	3	6					
-	2	8	0	7	-	1	8	8	5					



NOME _____ DÍA _____

Resolve as multiplicacións e colorea os espazos onde estean os resultados correctos.

	8			6			3			4			1 0			6	
x	6			x	2			x	8				x	2		x	6
	9			4			3			4			5			2	
x	2			x	9			x	6				x	4		x	8
	4			1 0			8										
x	7			x	4			x	5								



NOME _____ DÍA _____


Que camiño ten que percorrer Álvaro para ir ao parque? Resolve as multiplicacións e colorea os recadros onde estean os resultados correctos.

9 x 4 =				5 x 2 =				8 x 3 =			
7 x 6 =				10 x 2 =				6 x 6 =			
5 x 8 =				6 x 9 =				6 x 8 =			
6 x 3 =				7 x 8 =				9 x 5 =			



NOME _____ DÍA _____

1-Colorea os espacios con números maiores que 415 e verás o debuxo.



2-Escribe de que número acabado en 0 está máis cerca cada un dos seguintes.

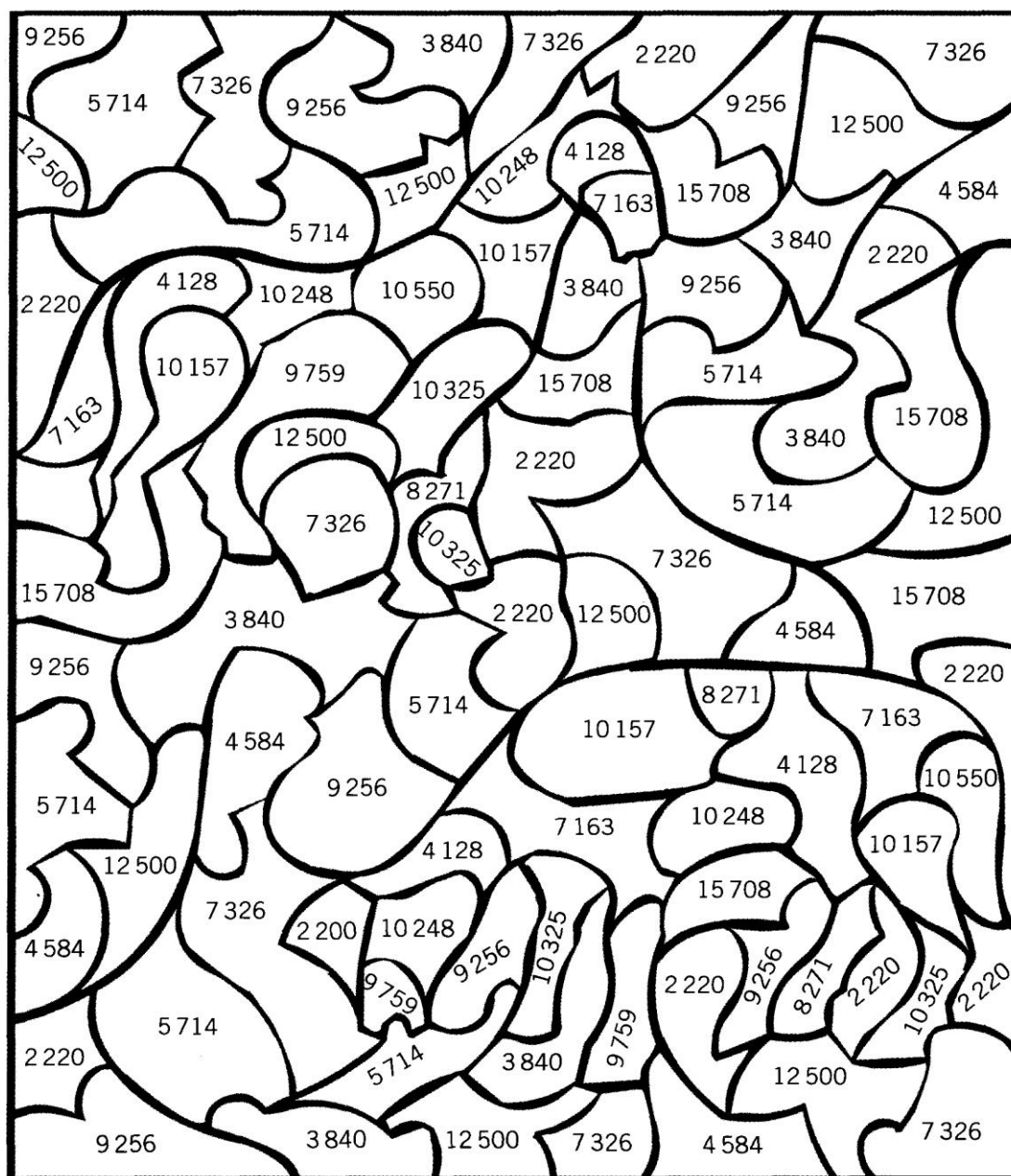
Oitenta e nove	
Setenta e un	
Cento once	

Douscentos vinte e sete	
Setecentos corenta e tres	
Cento trinta e catro	

NOME _____ DÍA _____

Resolve as operacións e colorea os espazos onde estean os resultados correctos.


		3	7	4				9	4	3			4	5	0	5					9	8	2		
	9	5	0	8				8	0	9			2	2	8	5					5	4	6	7	
+		3	6	6				+	2	3	7	6			+	3	7	3			+	3	7	0	8
		2	0	2	5			3	2	5	0			2	3	1	6				1	7	9	4	
		3	7	1	5			1	7	8	0			1	5	0	8					8	4	6	
+		4	8	1	0			+	9	2	5			+	1	3	4	0			+	3	0	6	8



NOME _____ DÍA _____

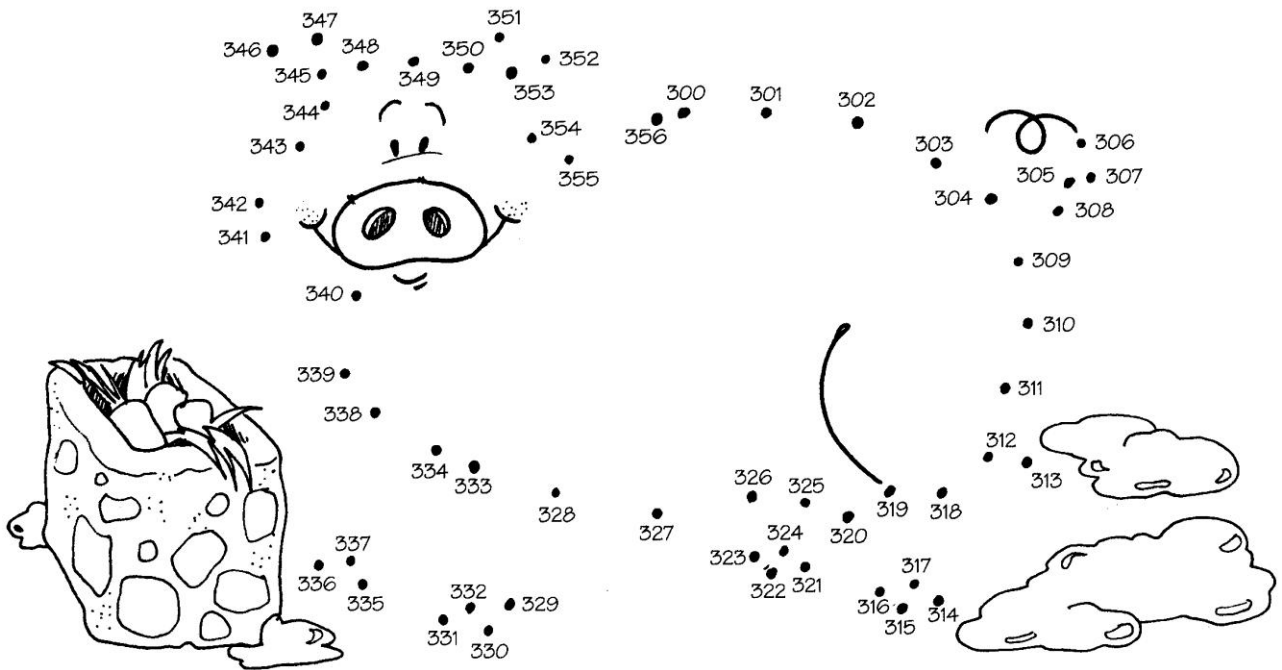
Resuelve las operaciones e colorea los espacios onde estean os resultados correctos.

		4	3	3				4	0	1				1	2	0				3	7	5
		1	3	3				1	1	2					9	6				2	6	1
		+	3	4	0			+	2	0	5			+	7	8			+	2	5	9
		4	2	6				2	4	6				1	5	6				3	6	7
		3	2	5				1	7	7					4	9				2	0	6
		+	1	6	3			+	1	8	6			+	8	5			+	1	8	4



NOME _____ DÍA _____

1-Segue os números desde o 300



2-Segue as instrucións e verás o que quere o gato.

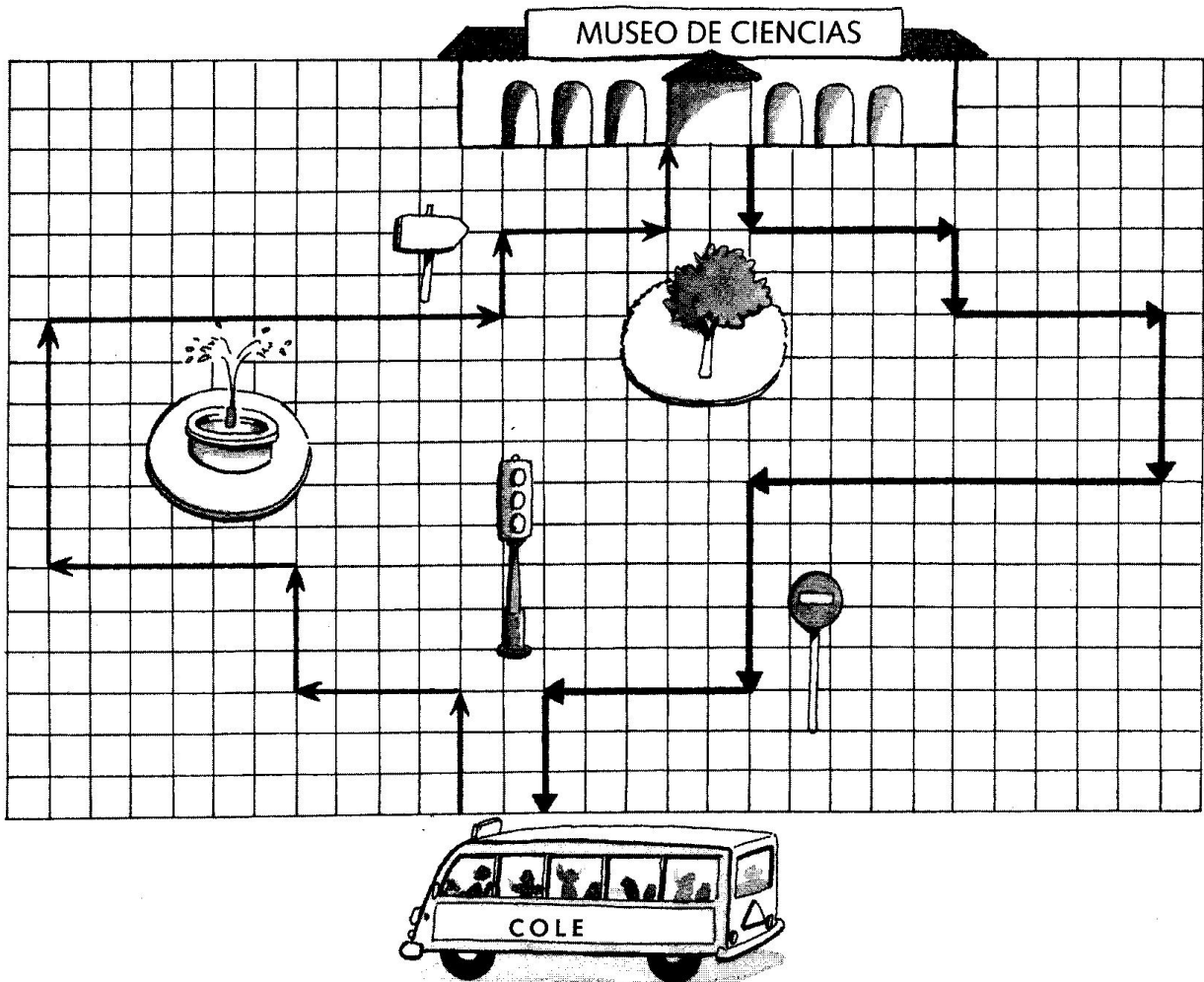
2 dereita - 1 abaixo - 7 dereita - 2 abaixo
5 esquerda - 1 abaixo - 7 dereita





NOME _____ DÍA _____

Escribe o camiño que percorre o autobús.



Cando vai ao museo:

↑ 3 cadros - ← 4 cadros - ↑ cadros - ← cadros -
 ↑ cadros - → cadros - ↑ cadros - → cadros -
 ↑ cadros -

Cando vén de volta:

↓ 2 cadros - → cadros - ↓ cadros - → cadros -
 ↓ cadros - ← cadros - ↓ cadros - ← cadros -
 ↓ cadros -